

电动力学整理 *|

迎战小恶魔

Justin

2024-12-16 Mon 11:44

目录

…持续更新中…

发现错误请私我，会非常感谢你

PDF: 文件不一定最新

答案还在校对，部分是 AI 直出

目录很方便 ->

考试预判

- 矢量计算：散旋度计算 (δ 出现)
- 电场：镜像电荷 (球); 特别的题 - $\cos\theta$
- 磁场：电流元 (BS)
- Laplace: 介质球在电场中; 正方体分离变量
- 相对论: 双生子

不考复杂计算，电动本身考得少，电磁波传播界面透射反射不考

可能不给但考的公式

Maxwell	无需多言	$\nabla \cdot E = \frac{\rho}{\epsilon}$	
		$\nabla \times E = -\frac{\partial B}{\partial t}$	
		$\nabla \cdot B = 0$	
		$\nabla \times B = \mu_0 \left(J + \epsilon \frac{\partial E}{\partial t} \right)$	

BS 公式	位置电流算磁场	$d\mathbf{B} = \frac{\mu_0}{4\pi} \frac{I d\mathbf{l} \times \hat{\mathbf{r}}}{r^2}$	作业
Lorent 变换			

$$p := qr$$
$$p = \int \sigma r dS$$
$$\sigma = -\epsilon \left(\frac{\phi_e}{r} - \frac{\partial \phi_i}{\partial r} \right)_{r=R}$$

矢量分析

矢量运算：加减法略、点乘对应乘（在直角坐标系下）、叉乘行列式算
微分算符号 ∇ 与名词辨析：

梯度	gradient	∇f	作用标量得矢量	$= (\partial_x f_x, \partial_y f'_y, \partial_z f'_z)$
散度	divergence	$\nabla \cdot \vec{A}$	作用矢量得标量	$= \partial_x A_x + \partial_y A'_y + \partial_z A'_y$
旋度	curl	$\nabla \times \vec{A}$	作用矢量得矢量	

$$\begin{vmatrix} \hat{i} & \hat{j} & \hat{k} \\ \partial_x & \partial_y & \partial_z \\ A_x & A_y & A_z \end{vmatrix}$$

多次运算

场论微积分公式——换开为闭

基本公式 - 可类比微积分基本公式

$$\int_{\mathcal{P}_a}^{\mathcal{P}_b} \nabla f \cdot d\mathbf{l} = f(b) - f(a) \quad (1)$$

上式 a b 重合 (或闭合线积分 $\oint_{\mathcal{P}} \nabla f = 0$)

体上散度为闭合面积分——Gauss 公式
面上旋度为闭合线积分——Stokes 公式

Dirac 函数——描述奇点积分工具

重要公式:

$$\nabla \cdot \left(\frac{\hat{\mathbf{r}}}{r^2} \right) \stackrel{\text{换系}}{=} \frac{1}{r^2} \frac{\partial}{\partial r} \left(r^2 \frac{1}{r^2} \right) = 4\pi\delta(r) \quad (2)$$

特色

$$\begin{aligned} \cos\theta_1 \cos\theta_2 + \sin\theta_1 \sin\theta_2 &\rightarrow \vec{A} \cdot \vec{B} \\ \cos\theta_1 \sin\theta_2 - \sin\theta_1 \cos\theta_2 &\rightarrow \vec{A} \times \vec{B} = \dots = (0, 0, x_1 y_2 - x_2 y_1) \end{aligned}$$

公式表手册

$$\nabla f(\vec{u}) = ? = \frac{\partial f}{\partial u} \nabla \vec{u}$$

$$\nabla \cdot \vec{A}(\vec{u}) = ? = \nabla \vec{u} \cdot \frac{d\vec{A}}{d\vec{u}}$$

$$\nabla \times \vec{A}(\vec{u}) = ? = \nabla \vec{u} \times \frac{d\vec{A}}{d\vec{u}}$$

应当会给一些公式 Cartesian (直角坐标系)

$$\nabla = \hat{\mathbf{x}} \frac{\partial}{\partial x} + \hat{\mathbf{y}} \frac{\partial}{\partial y} + \hat{\mathbf{z}} \frac{\partial}{\partial z} \quad (3)$$

Cylindrical (柱坐标系, r, ϕ, z)

$$\nabla = \hat{\mathbf{r}} \frac{\partial}{\partial r} + \hat{\phi} \frac{1}{r} \frac{\partial}{\partial \phi} + \hat{\mathbf{z}} \frac{\partial}{\partial z} \quad (4)$$

Spherical (球坐标系, r, θ, ϕ)

$$\nabla = \hat{\mathbf{r}} \frac{\partial}{\partial r} + \hat{\boldsymbol{\theta}} \frac{1}{r} \frac{\partial}{\partial \theta} + \hat{\boldsymbol{\phi}} \frac{1}{r \sin \theta} \frac{\partial}{\partial \phi} \quad (5)$$

柱坐标系

$$\frac{\partial}{\partial r} \left[r^2 \frac{\partial V}{\partial r} \right] + \frac{1}{\sin \theta} \frac{\partial}{\partial \theta} \left[\sin \theta \frac{\partial V}{\partial \theta} \right] = 0$$

中文书简单题

4. 应用高斯定理证明

$$\int_V dV \nabla \times \mathbf{f} = \oint_S d\mathbf{S} \times \mathbf{f}$$

应用斯托克斯(Stokes)定理^①证明

$$\int_S d\mathbf{S} \times \nabla \varphi = \oint_L d\mathbf{l} \varphi$$

4. (1) 高斯定理 $\int_V dV \nabla \cdot \vec{A} = \oint_S d\vec{S} \cdot \vec{A} \Leftrightarrow \left(\int_V (\nabla \cdot \vec{A}) dV = \oint_S \vec{A} \cdot d\vec{S} \right)$

令 $\vec{A} = \vec{r} \times \vec{c}$ (\vec{c} 为任意常矢量)

$$\int_V dV \nabla \cdot \vec{A} = \int_V dV \nabla \cdot (\vec{r} \times \vec{c}) = \int_V dV (\nabla \times \vec{r}) \cdot \vec{c}$$

$$\oint_S d\vec{S} \cdot \vec{A} = \oint_S d\vec{S} \cdot (\vec{r} \times \vec{c}) = \oint_S (d\vec{S} \times \vec{r}) \cdot \vec{c}$$

$$\Rightarrow \int_V dV (\nabla \times \vec{r}) = \oint_S d\vec{S} \times \vec{r}$$

5. 已知一个电荷系统的偶极矩定义为

$$\mathbf{p}(t) = \int_V \rho(\mathbf{x}', t) \mathbf{x}' dV'$$

利用电荷守恒定律 $\nabla \cdot \mathbf{J} + \frac{\partial \rho}{\partial t} = 0$ 证明 \mathbf{p} 的变化率为

$$\frac{d\mathbf{p}}{dt} = \int_V \mathbf{J}(\mathbf{x}', t) dV'$$

1.5
$$\frac{d\mathbf{p}}{dt} = \frac{d}{dt} \int_V \rho(\mathbf{x}', t) \mathbf{x}' dV' = \int_V \frac{\partial}{\partial t} [\rho(\mathbf{x}', t)] \mathbf{x}' dV'$$

$$= - \int_V [\nabla' \cdot \mathbf{J}(\mathbf{x}', t)] \mathbf{x}' dV'$$

这里 $\nabla' \cdot (\mathbf{J} \mathbf{x}') = (\nabla' \cdot \mathbf{J}) \mathbf{x}' + \mathbf{J} \cdot \nabla' \mathbf{x}'$ ($\nabla' \cdot (\mathbf{J} \mathbf{x}') = (\nabla' \cdot \mathbf{J}) \mathbf{x}' + (\mathbf{J} \cdot \nabla') \mathbf{x}'$)

电磁基本量

$$\rho = \epsilon \nabla \cdot \mathbf{E}$$

$$\rho = \nabla \cdot \vec{P} \sigma = p = qr, \text{ dipole } P = \sum qr$$

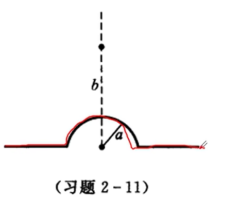
Problem 3.18 The potential at the surface of a sphere (radius R) is given by

$$V_0 = k \cos 3\theta,$$

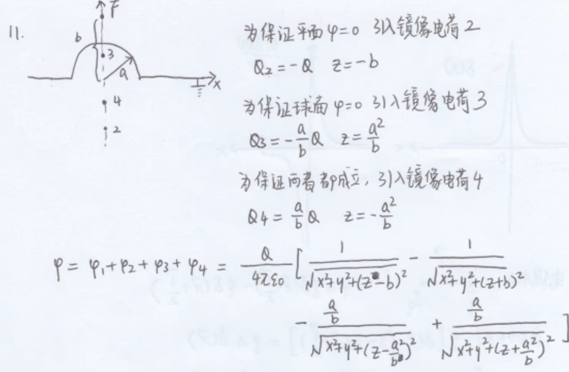
where k is a constant. Find the potential inside and outside the sphere, as well as the surface charge density $\sigma(\theta)$ on the sphere. (Assume there's no charge inside or outside the sphere.)

镜像电荷法

11. 在接地的导体平面上有一半径为 a 的半球凸部(如图),半球的球心在导体平面上,点电荷 Q 位于系统的对称轴上,并与平面相距为 $b(b>a)$,试用电像法求空间电势.



(习题 2-11)



11. 为保证平面 $\varphi=0$ 引入镜像电荷 2
 $Q_2 = -Q \quad z = -b$
 为保证球面 $\varphi=0$ 引入镜像电荷 3
 $Q_3 = -\frac{a}{b}Q \quad z = \frac{a^2}{b}$
 为保证两者都成立, 引入镜像电荷 4
 $Q_4 = \frac{a}{b}Q \quad z = -\frac{a^2}{b}$

$$\varphi = \varphi_1 + \varphi_2 + \varphi_3 + \varphi_4 = \frac{Q}{4\pi\epsilon_0} \left[\frac{1}{\sqrt{x^2+y^2+(z-b)^2}} - \frac{1}{\sqrt{x^2+y^2+(z+b)^2}} - \frac{\frac{a}{b}}{\sqrt{x^2+y^2+(z-\frac{a^2}{b})^2}} + \frac{\frac{a}{b}}{\sqrt{x^2+y^2+(z+\frac{a^2}{b})^2}} \right]$$

作业

1. 一个半径为 R 的电介质球,极化强度为 $\mathbf{P} = K \frac{\mathbf{r}}{r^2}$, 电容率为 ϵ .
 - (1) 计算束缚电荷的体密度和面密度;
 - (2) 计算自由电荷体密度;
 - (3) 计算球外和球内的电势;
 - (4) 求该带电介质球产生的静电场总能量.

$$1. (1) \rho_p = -\nabla \cdot \vec{P} = -\nabla \cdot \left(\frac{K\vec{r}}{r^2} \right) = -K \nabla \cdot \left(\frac{1}{r^2} \vec{r} \right) = -K \left[\frac{1}{r^2} \nabla \cdot \vec{r} + \nabla \left(\frac{1}{r^2} \right) \cdot \vec{r} \right]$$

$$= -K \left[\frac{1}{r^2} 3 - \frac{2}{r^3} \nabla r \cdot \vec{r} \right] = -K \left[\frac{3}{r^2} - \frac{2}{r^3} \vec{r} \cdot \vec{r} \right] = -K \left[\frac{3}{r^2} - \frac{2}{r^2} \right] = -\frac{K}{r^2}$$

$$d_f = -\hat{n} \cdot (\vec{P}_2 - \vec{P}_1) = -\hat{e}_r \cdot \left(\frac{K\vec{r}}{r^2} - \vec{P}_1 \right) = \hat{e}_r \cdot \vec{P}_1 = \hat{e}_r \cdot \frac{K\vec{r}}{r^2} = \frac{K}{r} \Big|_{r=R} = \frac{K}{R}$$

$$(2) \text{由 1.9 可知 } \rho_f = -\left(1 - \frac{\epsilon_0}{\epsilon}\right) \rho_p = -\frac{\epsilon - \epsilon_0}{\epsilon} \rho_p$$

$$\text{则 } \rho_f = -\frac{\epsilon - \epsilon_0}{\epsilon} \rho_p = -\frac{\epsilon - \epsilon_0}{\epsilon} \left(-\frac{K}{r^2}\right) = \frac{\epsilon - \epsilon_0}{\epsilon} \frac{K}{r^2}$$

(3) 先求出球内外电场

球内 $\vec{D} = \epsilon_0 \vec{E} + \vec{P} = \epsilon \vec{E} \Rightarrow \vec{P} = (\epsilon - \epsilon_0) \vec{E} \Rightarrow \vec{E} = \frac{\vec{P}}{\epsilon - \epsilon_0} = \frac{k \vec{r}}{(\epsilon - \epsilon_0) r^2}$

球外 高斯定理 $\oint_S \vec{D} \cdot d\vec{s} = \Sigma q_{自由}$

$$\Rightarrow D \cdot 4\pi r^2 = \int_V \rho_f dV = \int_0^R \frac{\epsilon k}{(\epsilon - \epsilon_0) r^2} 4\pi r^2 dr = \frac{4\pi \epsilon k}{\epsilon - \epsilon_0} \int_0^R dr = \frac{4\pi \epsilon k R}{\epsilon - \epsilon_0}$$

分力与薄球壳等效

$$\Rightarrow D = \frac{\epsilon k R}{(\epsilon - \epsilon_0) r^2} \Rightarrow E = \frac{D}{\epsilon} = \frac{\epsilon k R}{\epsilon_0 (\epsilon - \epsilon_0) r^2} \quad \vec{E} = \frac{\epsilon k R}{\epsilon_0 (\epsilon - \epsilon_0) r^2} \vec{r}$$

球外电势 $\varphi_2 = \int_r^\infty \frac{\epsilon k R}{\epsilon_0 (\epsilon - \epsilon_0) r^2} dr = \frac{\epsilon k R}{\epsilon_0 (\epsilon - \epsilon_0)} \left(-\frac{1}{r}\right) \Big|_r^\infty = \frac{\epsilon k R}{\epsilon_0 (\epsilon - \epsilon_0) r}$



球内电势 $\varphi_1 = \int_R^\infty \frac{\epsilon k R}{\epsilon_0 (\epsilon - \epsilon_0) r^2} dr + \int_r^R \frac{k}{(\epsilon - \epsilon_0) r} dr = \frac{\epsilon k R}{\epsilon_0 (\epsilon - \epsilon_0) R} + \frac{k}{\epsilon - \epsilon_0} \ln r \Big|_r^R$

$$= \frac{\epsilon k}{\epsilon_0 (\epsilon - \epsilon_0)} + \frac{k}{\epsilon - \epsilon_0} \ln \frac{R}{r}$$

(4) $W = \int_{\infty}^0 \frac{1}{2} \epsilon E^2 dV = \int_{球内} \frac{1}{2} \epsilon E_{球内}^2 dV + \int_{球外} \frac{1}{2} \epsilon_0 E_{球外}^2 dV$

$$= \int_0^R \frac{1}{2} \epsilon \frac{k^2}{(\epsilon - \epsilon_0)^2 r^2} \cdot 4\pi r^2 dr + \int_R^\infty \frac{1}{2} \epsilon_0 \frac{\epsilon^2 k^2 R^2}{\epsilon_0^2 (\epsilon - \epsilon_0)^2 r^4} \cdot 4\pi r^2 dr$$

$$= \frac{2\pi \epsilon k^2}{(\epsilon - \epsilon_0)^2} \int_0^R dr + \frac{2\pi \epsilon^2 k^2 R^2}{\epsilon_0 (\epsilon - \epsilon_0)^2} \int_R^\infty \frac{1}{r^2} dr = \frac{2\pi \epsilon k^2 R}{(\epsilon - \epsilon_0)^2} + \frac{2\pi \epsilon^2 k^2 R^2}{\epsilon_0 (\epsilon - \epsilon_0)^2} \frac{1}{R}$$

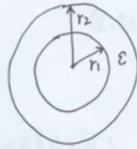
$$= \frac{2\pi \epsilon k^2 R}{(\epsilon - \epsilon_0)^2} + \frac{2\pi \epsilon^2 k^2 R}{\epsilon_0 (\epsilon - \epsilon_0)^2}$$

中文书

7. 有一内外半径分别为 r_1 和 r_2 的空心介质球, 介质的电容率为 ϵ . 使介质内均匀带静止自由电荷密度 ρ_f , 求

- (1) 空间各点的电场;
- (2) 极化电荷和极化面电荷分布.

7.



(1) 球对称体系, 以厚球心为高斯面球心作球的高斯面.

① $r < r_1$ $\oint_S \vec{D} \cdot d\vec{S} = 0 \Rightarrow \vec{D} = 0 \Rightarrow \vec{E} = 0$

② $r_1 < r < r_2$ $\oint_S \vec{D} \cdot d\vec{S} = (\frac{4}{3}\pi r^3 - \frac{4}{3}\pi r_1^3) \rho_f$

$\Rightarrow 4\pi r^2 D = (\frac{4}{3}\pi r^3 - \frac{4}{3}\pi r_1^3) \rho_f$

$\Rightarrow D = \frac{r^3 - r_1^3}{3r^2} \rho_f \Rightarrow E = \frac{D}{\epsilon} = \frac{r^3 - r_1^3}{3\epsilon r^2} \rho_f$

$\vec{E} = \frac{(r^3 - r_1^3) \rho_f}{3\epsilon r^2} \vec{e}_r$

③ $r > r_2$ $\oint_S \vec{D} \cdot d\vec{S} = (\frac{4}{3}\pi r_2^3 - \frac{4}{3}\pi r_1^3) \rho_f$

$\Rightarrow 4\pi r^2 D = (\frac{4}{3}\pi r_2^3 - \frac{4}{3}\pi r_1^3) \rho_f \Rightarrow D = \frac{(r_2^3 - r_1^3) \rho_f}{3r^2}$

$\vec{E} = \frac{(r_2^3 - r_1^3) \rho_f}{3\epsilon_0 r^2} \vec{e}_r$

8. 内外半径分别为 r_1 和 r_2 的无穷长中空导体圆柱, 沿轴向流有恒定均匀自由电流 J_f . 导体的磁导率为 μ . 求磁感应强度和磁化电流.

8. 柱坐标 (r, ϕ, z)

(1) 磁感应强度 (安培环路定理)

① $r < r_1$ $\oint_L \vec{H} \cdot d\vec{l} = 0 \Rightarrow H = 0 \Rightarrow B = \mu_0 H = 0$

② $r_1 < r < r_2$ $\oint_L \vec{H} \cdot d\vec{l} = J_f \cdot (\pi r^2 - \pi r_1^2) \Rightarrow 2\pi r H = J_f \cdot (\pi r^2 - \pi r_1^2) \Rightarrow H = \frac{(r^2 - r_1^2) J_f}{2r}$

$B = \mu H = \frac{\mu (r^2 - r_1^2) J_f}{2r} \quad \vec{B} = \frac{\mu (r^2 - r_1^2) J_f}{2r} \vec{e}_\phi$

③ $r > r_2$ $\oint_L \vec{H} \cdot d\vec{l} = J_f (\pi r_2^2 - \pi r_1^2) \Rightarrow 2\pi r H = J_f (\pi r_2^2 - \pi r_1^2) \Rightarrow H = \frac{(r_2^2 - r_1^2) J_f}{2r}$

$B = \mu_0 H = \frac{\mu_0 (r_2^2 - r_1^2) J_f}{2r} \quad \vec{B} = \frac{\mu_0 (r_2^2 - r_1^2) J_f}{2r} \vec{e}_\phi$

(2) $\vec{J}_M = \nabla \times \vec{M} \quad \vec{H} = \frac{\vec{B}}{\mu_0} - \vec{M} \Rightarrow \vec{M} = \frac{\vec{B}}{\mu_0} - \vec{H} = (\frac{\mu}{\mu_0} - 1) \frac{(r^2 - r_1^2) J_f}{2r} \vec{e}_\phi$

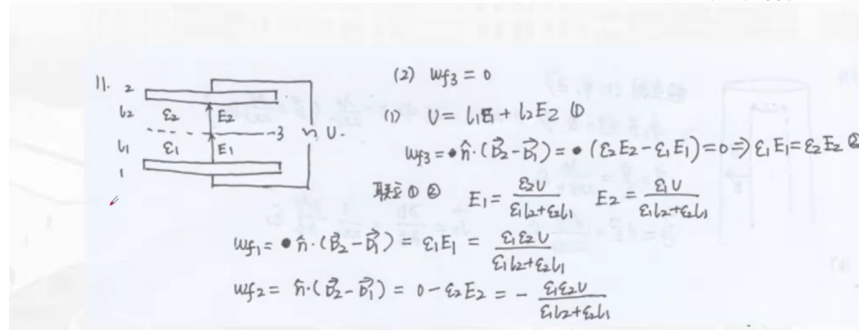
$\vec{J}_M = \nabla \times \left[(\frac{\mu}{\mu_0} - 1) \frac{(r^2 - r_1^2) J_f}{2r} \vec{e}_\phi \right] = \frac{1}{2} (\frac{\mu}{\mu_0} - 1) J_f \nabla \times \left[r \vec{e}_\phi - \frac{r_1^2}{r} \vec{e}_\phi \right]$

$= \frac{1}{2} (\frac{\mu}{\mu_0} - 1) J_f \nabla \times (r \vec{e}_\phi) = \frac{1}{2} (\frac{\mu}{\mu_0} - 1) J_f r_1^2 \nabla \times (\frac{1}{r} \vec{e}_\phi)$

11. 平行板电容器内有两层介质, 它们的厚度分别为 l_1 和 l_2 , 电容率为 ϵ_1 和 ϵ_2 , 今在两板上接上电动势为 \mathcal{E} 的电池, 求:

- (1) 电容器两板上的自由电荷面密度 ω_f ;
- (2) 介质分界面上的自由电荷面密度 ω_f .

若介质是漏电的, 电导率分别为 σ_1 和 σ_2 , 当电流达到恒定时, 上述两问题的结果如何?



(2) $w_{f3} = 0$

(1) $U = l_1 E_1 + l_2 E_2$ ①

$w_{f3} = \hat{n} \cdot (D_2 - D_1) = (\epsilon_2 E_2 - \epsilon_1 E_1) = 0 \Rightarrow \epsilon_1 E_1 = \epsilon_2 E_2$ ②

联立 ① ② $E_1 = \frac{\epsilon_2 U}{\epsilon_1 l_2 + \epsilon_2 l_1}$ $E_2 = \frac{\epsilon_1 U}{\epsilon_1 l_2 + \epsilon_2 l_1}$

$w_{f1} = \hat{n} \cdot (D_2 - D_1) = \epsilon_1 E_1 = \frac{\epsilon_1 \epsilon_2 U}{\epsilon_1 l_2 + \epsilon_2 l_1}$

$w_{f2} = \hat{n} \cdot (D_2 - D_1) = 0 - \epsilon_2 E_2 = - \frac{\epsilon_1 \epsilon_2 U}{\epsilon_1 l_2 + \epsilon_2 l_1}$

边界条件:

12. 证明

- (1) 当两种绝缘介质的分界面上不带面自由电荷时, 电场线的曲折满足

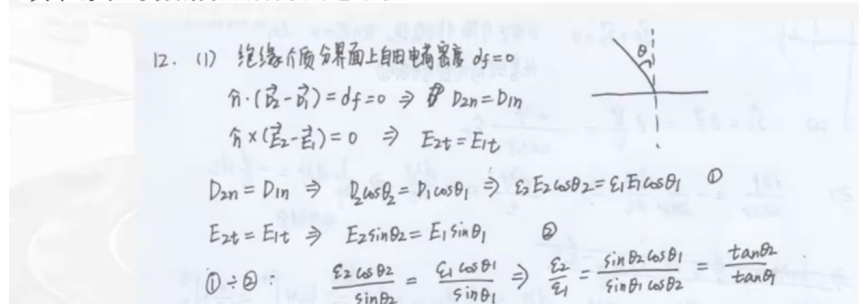
$$\frac{\tan \theta_2}{\tan \theta_1} = \frac{\epsilon_2}{\epsilon_1}$$

其中 ϵ_1 和 ϵ_2 分别为两种介质的介电常数, θ_1 和 θ_2 分别为界面两侧电场线与法线的夹角.

- (2) 当两种导电介质内流有恒定电流时, 分界面上电场线的曲折满足

$$\frac{\tan \theta_2}{\tan \theta_1} = \frac{\sigma_2}{\sigma_1}$$

其中 σ_1 和 σ_2 分别为两种介质的电导率.



12. (1) 绝缘介质分界面上自由电荷密度 $d_f = 0$

$\hat{n} \cdot (D_2 - D_1) = d_f = 0 \Rightarrow D_{2n} = D_{1n}$

$\hat{n} \times (E_2 - E_1) = 0 \Rightarrow E_{2t} = E_{1t}$

$D_{2n} = D_{1n} \Rightarrow \epsilon_2 E_2 \cos \theta_2 = \epsilon_1 E_1 \cos \theta_1$ ①

$E_{2t} = E_{1t} \Rightarrow E_2 \sin \theta_2 = E_1 \sin \theta_1$ ②

① / ②: $\frac{\epsilon_2 \cos \theta_2}{\sin \theta_2} = \frac{\epsilon_1 \cos \theta_1}{\sin \theta_1} \Rightarrow \frac{\epsilon_2}{\epsilon_1} = \frac{\sin \theta_1 \cos \theta_1}{\sin \theta_2 \cos \theta_2} = \frac{\tan \theta_2}{\tan \theta_1}$

Laplace 方程解法

更一般的讲法应当是 Poisson 方程, 区别是 Laplace 这是一定要掌握方法流程的

方程不忘：

$$\nabla^2 \phi = 0$$

何时右侧有 ρ/ϵ 区域内有电荷，如果是点电荷 ->

BV1S4421D7za

2、分离变量法求解空间电势分布 适用于表面和分界面规则，且空间无电荷或电荷分布在中心处的情形。

拉普拉斯(泊松)方程 + 边界条件 + 边值关系 利用分离变量法求解

$\nabla^2 \phi = 0$ 或 $\nabla^2 \phi = -\frac{\rho}{\epsilon}$ $\phi|_{R \rightarrow \infty} = 0, \phi|_{R=0} = \text{有限}$
 外加匀强电场, $\phi|_{R \rightarrow \infty} = -E_0 R \cos \theta$

通解：轴对称 $\phi(r, \theta) = \sum_n (a_n r^n + \frac{b_n}{r^{n+1}}) P_n(\cos \theta)$
 球对称： $\phi(r) = A + \frac{B}{r}$
 泊松方程解 = 通解 + 特解
 特解为带电体在空间产生电势
 点电荷 $\frac{Q}{4\pi\epsilon_0 R}$ 电偶极子 $\frac{\vec{p} \cdot \vec{R}}{4\pi\epsilon_0 R^3}$

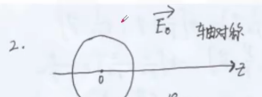
① 电介质与电介质界面
 $\phi_1 = \phi_2$ $\epsilon_1 \frac{\partial \phi_1}{\partial n} = \epsilon_2 \frac{\partial \phi_2}{\partial n}$

② 电介质与导体界面
 $\phi_1 = \phi_2$ $-\oint_S \epsilon \frac{\partial \phi}{\partial n} \cdot d\vec{S} = Q$

案例试炼

2. 在均匀外电场中置入半径为 R_0 的导体球，试用分离变量法求下列两种情况的电势：

- (1) 导体球上接有电池，使球与地保持电势差 ϕ_0 ；
- (2) 导体球上带总电荷 Q 。

2.  轴对称 令球心(原点)的电势为0.

$\phi = \sum_n (a_n R^n + \frac{b_n}{R^{n+1}}) P_n(\cos \theta)$
 (1) 为球: $\nabla^2 \phi = 0$
 边界条件 $\phi|_{R \rightarrow \infty} = -E_0 R \cos \theta$ $\phi|_{R=R_0} = \phi_0$
 $\phi|_{R \rightarrow \infty} = -E_0 R P_1(\cos \theta)$
 $a_1 = -E_0$ $a_n (n+1) = 0$
 $\phi = -E_0 R \cos \theta + \sum_n \frac{b_n}{R^{n+1}} P_n(\cos \theta)$
 $\phi_0 = -E_0 R_0 \cos \theta + \sum_n \frac{b_n}{R_0^{n+1}} P_n(\cos \theta) = \phi_0$
 PD: $\frac{b_0}{R_0} = \phi_0$
 $P_1: \frac{b_1}{R_0^2} - E_0 R_0 = 0$
 $P_2: \frac{b_2}{R_0^3} = 0$

$\Rightarrow b_0 = \phi_0 R_0, b_1 = E_0 R_0^3, b_n (n+1) = 0$
 $\phi = -E_0 R \cos \theta + \frac{\phi_0 R_0}{R} + \frac{E_0 R_0^3}{R^2} \cos \theta$

解题结构：

1. 写方程：注意有几个区域，有电荷的方程右边有 ρ 项

2. 写解: 根据对称性, 一般是二元柱坐标系, 更简单的球坐标。把 Legendre 多项式写出来
3. 边界条件: 连续、无穷远
4. 代入得到参数值

有电荷:

3. 均匀介质球的中心置一点电荷 Q , 球的电容率为 ϵ , 球外为真空, 试用分离变数法求空间电势, 把结果与使用高斯定理所得结果比较。

3. 分离变量法 方程 $\nabla^2 \varphi_1 = -\frac{Qf}{\epsilon} \delta(\vec{r})$ $\varphi_1 = (a + \frac{b}{R}) + \frac{Qf}{4\pi\epsilon R}$ (特解)
 $\nabla^2 \varphi_2 = 0$ $\varphi_2 = c + \frac{d}{R}$
 边界条件 $\varphi_2|_{R \rightarrow \infty} = 0 \Rightarrow c = 0$ $\varphi_2 = \frac{d}{R}$
 $\varphi_1'|_{R=0}$ 有限 $\Rightarrow b = 0$ $\varphi_1 = a + \frac{Qf}{4\pi\epsilon R}$
 连续关系 $\varphi_1|_{R=R_0} = \varphi_2|_{R=R_0} \Rightarrow a + \frac{Qf}{4\pi\epsilon R_0} = \frac{d}{R_0}$ ①
 $\epsilon \frac{\partial \varphi_1}{\partial R}|_{R=R_0} = \epsilon_0 \frac{\partial \varphi_2}{\partial R}|_{R=R_0} \Rightarrow \epsilon \left(-\frac{Qf}{4\pi\epsilon R^2}\right)|_{R=R_0} = \epsilon_0 \left(-\frac{d}{R^2}\right)|_{R=R_0}$
 $\frac{Qf}{4\pi R_0^2} = \frac{\epsilon_0 d}{R_0^2}$ ②
 联立 ① ② $a = \frac{Qf}{4\pi\epsilon_0 R_0} - \frac{Qf}{4\pi\epsilon R_0}$ $d = \frac{Qf}{4\pi\epsilon_0}$
 $\varphi_1 = \frac{Qf}{4\pi\epsilon_0 R_0} - \frac{Qf}{4\pi\epsilon R_0} + \frac{Qf}{4\pi\epsilon R}$ $\varphi_2 = \frac{Qf}{4\pi\epsilon_0 R}$

光波传导

不考

介质变化。主要用边界条件

电动力学中的波传播

波动方程

波动方程描述了电磁波在介质中的传播。对于电场 \mathbf{E} 和磁场 \mathbf{B} , 它们满足以下波动方程:

$$\nabla^2 \mathbf{E} - \frac{1}{c^2} \frac{\partial^2 \mathbf{E}}{\partial t^2} = 0$$

$$\nabla^2 \mathbf{B} - \frac{1}{c^2} \frac{\partial^2 \mathbf{B}}{\partial t^2} = 0$$

其中， ∇^2 是拉普拉斯算符， c 是光速。

跨介质边界条件

当电磁波在两种不同的介质之间传播时，跨介质的边界条件如下：

- 电场的切向分量在边界处是连续的：

$$\mathbf{E}_1^{\parallel} = \mathbf{E}_2^{\parallel}$$

- 磁场的切向分量在边界处是连续的：

$$\mathbf{B}_1^{\parallel} = \mathbf{B}_2^{\parallel}$$

- 电场的法向分量的跳跃与自由电荷密度成正比：

$$\hat{n} \cdot (\mathbf{D}_2 - \mathbf{D}_1) = \sigma_{\text{free}}$$

- 磁场的法向分量的跳跃与自由电流密度成正比：

$$\hat{n} \cdot (\mathbf{B}_2 - \mathbf{B}_1) = 0$$

折射率虚部

介质的折射率 n 可能具有虚部 k ，当波在介质中传播时，会出现衰减现象。折射率虚部表示波的衰减程度：

$$n = n' + ik$$

其中， n' 是折射率的实部， k 是虚部。虚部的存在导致波的幅度随距离的增加而衰减，因此在吸收介质中，波的传播速度减慢且波的强度逐渐减小。

相对论

- 光速不变：Lorentz 变换
- 相对性原理：物理规律都不变

$x' = \gamma(x - vt)$ $y' = y$ $z' = z$ $t' = \gamma\left(t - \frac{v}{c^2}x\right)$ <p style="text-align: center;">正变换</p>	$x = \gamma(x' + vt')$ $y = y'$ $z = z'$ $t = \gamma\left(t' + \frac{v}{c^2}x'\right)$ <p style="text-align: center;">逆变换</p>	$u'_x = \frac{u_x - v}{1 - \frac{v}{c^2}u_x}$ $u'_y = \frac{u_y}{\gamma\left(1 - \frac{v}{c^2}u_x\right)}$ $u'_z = \frac{u_z}{\gamma\left(1 - \frac{v}{c^2}u_x\right)}$ <p style="text-align: center;">正变换</p>	$u_x = \frac{u'_x + v}{1 + \frac{v}{c^2}u'_x}$ $u_y = \frac{u'_y}{\gamma\left(1 + \frac{v}{c^2}u'_x\right)}$ $u_z = \frac{u'_z}{\gamma\left(1 + \frac{v}{c^2}u'_x\right)}$ <p style="text-align: center;">逆变换</p>
位置、时间		速度	

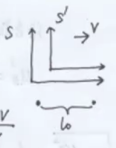
5. 有一光源 S 与接收器 R 相对静止, 距离为 l_0 , S-R 装置浸在均匀无限的液体介质(静止折射率 n) 中. 试对下列三种情况计算光源发出讯号到接收器接到讯号所经历的时间.

- (1) 液体介质相对于 S-R 装置静止;
- (2) 液体沿着 S-R 连线方向以速度 v 流动;
- (3) 液体垂直于 S-R 连线方向以速度 v 流动.

5. 在液体介质中光速 $u = \frac{c}{n}$ (相对于液体静止参考系)

(1) $\Delta t = \frac{l_0}{u} = \frac{nl_0}{c}$

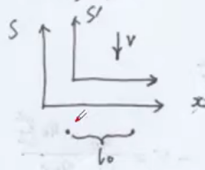
(2) 选择参考系 S, 液体参考系 S' ($u'_x = \frac{c}{n}$)



$$u_x = \frac{u'_x + v}{1 + \frac{u'_x v}{c^2}} = \frac{\frac{c}{n} + v}{1 + \frac{v}{\frac{c}{n}}} = \frac{\frac{c}{n} + v}{1 + \frac{v}{nc}} = \frac{c^2 + nc v}{nc + v}$$

则 $\Delta t = \frac{l_0}{u_x} = \frac{l_0(nc + v)}{c^2 + nc v}$

(2) 地球参考系 S , 液体参考系 S'



在 S 系中, 光的运动速度 $u = (u_x, u_y) = (u_x, 0)$

在 S' 系中, 光的运动速度 $u' = (u'_x, u'_y)$

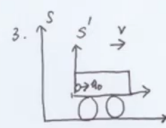
$$u'_x = \frac{u_x}{\sqrt{1 - \frac{v^2}{c^2}}} = \sqrt{1 - \frac{v^2}{c^2}} u_x \quad u'_y = \frac{u_y - v}{1 - \frac{v}{c^2} u_y} = -v$$

$$\text{由 } u_x'^2 + u_y'^2 = \left(\frac{c}{n}\right)^2 \Rightarrow \left(1 - \frac{v^2}{c^2}\right) u_x^2 + v^2 = \frac{c^2}{n^2} \Rightarrow u_x = \sqrt{\frac{\frac{c^2}{n^2} - v^2}{1 - \frac{v^2}{c^2}}}$$

$$\text{则 } \Delta t = \frac{l_0}{u_x} = \frac{l_0 \sqrt{1 - \frac{v^2}{c^2}}}{\sqrt{\frac{c^2}{n^2} - v^2}}$$

钟慢: $t = \frac{t_0}{\sqrt{1 - \frac{v^2}{c^2}}}$ 尺缩: $l = l_0 \sqrt{1 - \frac{v^2}{c^2}}$

3. 静止长度为 l_0 的车厢, 以速度 v 相对于地面运行, 车厢的后壁以速度 u_0 向前推出一个小球, 求地面观察者看到小球从后壁到前壁的运动时间.



在地面参考系中, 车厢长度 $l = l_0 \sqrt{1 - \frac{v^2}{c^2}}$

观察小球的运动速度 $u_x = \frac{u'_x + v}{1 + \frac{u'_x v}{c^2}} = \frac{u_0 + v}{1 + \frac{u_0 v}{c^2}}$

观察小球相对于车厢速度 $u_{x0} = u_x - v = \frac{u_0 + v}{1 + \frac{u_0 v}{c^2}} - v = \frac{u_0 - \frac{u_0 v^2}{c^2}}{1 + \frac{u_0 v}{c^2}}$

$$\text{则时间 } \Delta t = \frac{l}{u_{x0}} = \frac{l_0 \sqrt{1 - \frac{v^2}{c^2}}}{\frac{u_0 (1 - \frac{v^2}{c^2})}{1 + \frac{u_0 v}{c^2}}} = \frac{l_0 (1 + \frac{u_0 v}{c^2})}{u_0 \sqrt{1 - \frac{v^2}{c^2}}}$$

3、相对性原理：物理定律在所有惯性系中具有相同的形式(电动力学)

(1) 闵可夫斯基四维空间 (x,y,z,ict)

物理量在不同参考系中的表示可以看做是四维空间的转动

(2) 洛伦兹变换的四维正交矩阵表示

$$\begin{pmatrix} x_1' \\ x_2' \\ x_3' \\ x_4' \end{pmatrix} = \begin{pmatrix} \gamma & 0 & 0 & i\beta\gamma \\ 0 & 1 & 0 & 0 \\ 0 & 0 & 1 & 0 \\ -i\beta\gamma & 0 & 0 & \gamma \end{pmatrix} \begin{pmatrix} x_1 \\ x_2 \\ x_3 \\ x_4 \end{pmatrix} \quad x'_\mu = a_{\mu\nu}x_\nu$$

爱因斯坦求和惯例

① 4维数(1,2,3,4)的下角标用希腊字母表示, 3维数(1,2,3)下角标用英文字母表示;

对于四维时空坐标可记为 x_μ 对于四维洛伦兹变换可记为 $a_{\mu\nu}$

② 若一项中同一下标出现两次, 表示对该下标所有取值求和。

四维时空间隔的平方可记为 $\Delta s^2 = x_\mu x_\mu = x_1x_1 + x_2x_2 + x_3x_3 + x_4x_4$

变化 (38/54)

A particle of mass m whose total energy is twice its rest energy collides with an identical particle at rest. If they stick together, what is the mass of the resulting composite particle? What is its velocity?

1. Total energy of the moving particle:

- The total energy E is given by:

$$E = \gamma mc^2$$

where $\gamma = \frac{1}{\sqrt{1-v^2/c^2}}$ is the Lorentz factor.

- Given $E = 2mc^2$, we solve for v :

$$\gamma = 2 \implies \frac{1}{\sqrt{1-v^2/c^2}} = 2 \implies 1 - v^2/c^2 = \frac{1}{4}$$

$$v^2 = \frac{3}{4}c^2 \implies v = \frac{\sqrt{3}}{2}c$$

2. Momentum of the moving particle:

- The relativistic momentum p is:

$$p = \gamma mv = 2m \cdot \frac{\sqrt{3}}{2}c = \sqrt{3}mc$$

3. Total momentum of the system before collision:

- The stationary particle has no momentum, so the total momentum is:

$$p_{\text{total}} = \sqrt{3}mc$$

4. Total energy of the system before collision:

- Energy of the moving particle: $2mc^2$
- Energy of the stationary particle: mc^2
- Total energy:

$$E_{\text{total}} = 2mc^2 + mc^2 = 3mc^2$$

5. Mass of the composite particle:

- Using the invariant mass relation:

$$E_{\text{total}} = Mc^2 \implies M = \frac{E_{\text{total}}}{c^2} = \frac{3mc^2}{c^2} = 3m$$

6. Velocity of the composite particle:

- Using the momentum-energy relation:

$$p_{\text{total}} = Mv_{\text{composite}} \implies v_{\text{composite}} = \frac{p_{\text{total}}}{M} = \frac{\sqrt{3}mc}{3m} = \frac{\sqrt{3}}{3}c$$

7. Mass of the composite particle: $M = 3m$

8. Velocity of the composite particle: $v_{\text{composite}} = \frac{\sqrt{3}}{3}c$

双生子

Problem 12.16 The twin paradox revisited. On their 21st birthday, one twin gets on a moving sidewalk, which carries her out to star X at speed v . Her twin brother stays home. When the traveling twin gets to star X, she immediately jumps onto the returning moving sidewalk and comes back to earth, again at speed v . She arrives on her 39th birthday (as determined by her watch).

1. How old is her twin brother (who stayed at home)? (a)
2. How far away is star X? (Give your answer in light years.) (b)
3. What are the coordinates (x, t) of the jump (from outbound to inbound sidewalk) in S ? (c)
4. What are the coordinates (\bar{x}, \bar{t}) of the jump in \bar{S} ? (d)
5. What are the coordinates $(\bar{\bar{x}}, \bar{\bar{t}})$ of the jump in $\bar{\bar{S}}$? (e)
6. If the traveling twin wanted her watch to agree with the clock in \bar{S} , how would she have to reset it immediately after the jump? If she did this, what would her watch read when she got home? (This wouldn't change her age, of course—she's still 39—it would just make her watch agree with the standard synchronization in \bar{S} .) (f)
7. If the traveling twin is asked the question, "How old is your brother right now?", what is the correct reply (i) just before she makes the jump, (ii) just after she makes the jump? (Nothing dramatic happens to her brother during the split second between (i) and (ii), of course; what does change abruptly is his sister's notion of what 'right now, back home' means.) (g)
8. How many earth years does the return trip take? Add this to (ii) from (g) to determine how old she expects him to be at their reunion. Compare your answer to (a). (h)

Problem 12.16

(a) Moving clock runs slow, by a factor $\gamma = \frac{1}{\sqrt{1-(4/5)^2}} = \frac{5}{3}$. Since 18 years elapsed on the moving clock, $\frac{5}{3} \times 18 = 30$ years elapsed on the stationary clock. **51 years old.**

(b) By earth clock, it took 15 years to get there, at $\frac{4}{5}c$, so $d = \frac{4}{5}c \times 15 \text{ yrs} = \mathbf{12c \text{ years}}$ (12 light years).

(c) $t = 15 \text{ years}, x = 12c \text{ years.}$

(d) $\bar{t} = 9 \text{ years}, \bar{x} = 0.$ [She got *on* at the origin in \bar{S} , and rode along with \bar{S} , so she's *still* at the origin. If you doubt these values, use the Lorentz transformations, with x and t from (c).]

(e) Lorentz transformations: $\begin{cases} \bar{x} = \gamma(x + vt) \\ \bar{t} = \gamma(t + \frac{v}{c^2}x) \end{cases}$ (note that v is *negative*, since \bar{S} is going to the *left*).

$$\therefore \bar{x} = \frac{5}{3}(12c \text{ yrs} + \frac{4}{5}c \cdot 15 \text{ yrs}) = \frac{5}{3} \cdot 24c \text{ yrs} = \mathbf{40c \text{ years.}}$$

$$\bar{t} = \frac{5}{3}(15 \text{ yrs} + \frac{4}{5} \cdot \frac{c}{c^2} \cdot 12c \text{ yrs}) = \frac{5}{3}(15 + \frac{48}{5}) \text{ yrs} = (25 + 16) \text{ yrs} = \mathbf{41 \text{ years.}}$$

(f) Set her clock **ahead 32 years,** from 9 to 41 ($\bar{t} \rightarrow \bar{t}$). Return trip takes 9 years (moving time), so her clock will now read **50** years at her arrival. Note that this is $\frac{5}{3} \cdot 30$ years—precisely what she would calculate if the *stay-at-home* had been the traveler, for 30 years of his own time.

(g) (i) $\bar{t} = 9 \text{ yrs}, x = 0.$ What is t ? $t = \frac{v}{c^2}x + \frac{\bar{t}}{\gamma} = \frac{3}{5} \cdot 9 = \frac{27}{5} = 5.4 \text{ years}$, and he started at age 21, so he's **26.4 years old.** (*Younger* than the traveler (!) because to the traveler it's the *stay-at-home* who's moving.)

(ii) $\bar{t} = 41 \text{ yrs}, x = 0.$ What is t ? $t = \frac{\bar{t}}{\gamma} = \frac{3}{5} \cdot 41 = \frac{123}{5} = 24.6 \text{ years}$, and he started at 21, so he's **45.6 years old.**

(h) It will take another **5.4 years** of earth time for the return, so when she gets back, she will say her twin's age is $45.6 + 5.4 = \mathbf{51}$ years—which is what we found in (a). But note that to make it work from traveler's point of view you *must* take into account the jump in *perceived* age of stay-at-home when she changes coordinates from \bar{S} to S .

作业解析

Hw1

许多题方法太难（在回想自己简单的方法中）

(Textbook) Problem 1.13, 1.49, 1.53, 1.54, 1.60, 1.61, 1.62 Optional Problems: Derive the curl $\nabla \times A$ in cylindrical coordinates.

1.13

Problem 1.13 Let \mathbf{r} be the separation vector from a fixed point (x', y', z') to the point (x, y, z) , and let r be its length. Show that

(a) $\nabla(r^2) = 2\mathbf{r}.$

(b) $\nabla(1/r) = -\hat{\mathbf{r}}/r^2.$

(c) What is the general formula for $\nabla(r^n)$?

.....

$$\mathbf{r} = (x - x', y - y', z - z'), r = \sqrt{(x - x')^2 + (y - y')^2 + (z - z')^2}$$

$$\begin{aligned} \nabla(r^2) &= \nabla((x - x')^2 + (y - y')^2 + (z - z')^2) \\ &= (\partial_x, \partial_y, \partial_z) \\ &= 2(x - x', y - y', z - z') \\ &= \boxed{2\mathbf{r}} \end{aligned}$$

$$\begin{aligned} \nabla \frac{1}{r} &= (\partial_x, \partial_y, \partial_z) \frac{1}{\sqrt{(x - x')^2 + (y - y')^2 + (z - z')^2}} \\ &= \left(-\frac{1}{2} \frac{2(x - x')}{((x - x')^2 + (y - y')^2 + (z - z')^2)^{\frac{3}{2}}}, \dots, \dots \right) \\ &= -\frac{1}{r^3} \mathbf{r} \end{aligned}$$

$$\begin{aligned} \partial_x r^n &= nr^{n-1} \frac{\partial r}{\partial x} = nr^{n-1} \frac{1}{2} \frac{2(x - x')}{r} = nr^{n-2}(x - x') \\ &\rightarrow \nabla(\mathbf{r}^n) = \boxed{nr^{n-2}\mathbf{r}} \end{aligned}$$

1.49

(a) Let $F_1 = x^2\hat{z}$ and $F_2 = x\hat{x} + y\hat{y} + z\hat{z}$. Calculate the divergence and curl of F_1 and F_2 . Which one can be written as the gradient of a scalar? Find a scalar potential that does the job. Which one can be written as the curl of a vector? Find a suitable vector potential.

(b) Show that $F_3 = yz\hat{x} + zx\hat{y} + xy\hat{z}$ can be written both as the gradient of a scalar and as the curl of a vector. Find scalar and vector potentials for this function.

.....

$$\nabla \cdot F_1 = 0; \nabla \times F_1 = (0, -2x, 0)$$

$$\nabla \cdot F_2 = 1 + 1 + 1 = 3; \nabla \times F_2 = 0$$

找 F_1 的标量势, F_2 矢量势。可以各种令为 0

$$\nabla\phi = F_1 \rightarrow$$

$$\begin{cases} \partial_x\phi = 0 \\ \partial_y\phi = 0 \\ \partial_z\phi = x^2 \end{cases} \quad \phi = x^2z + ? \rightarrow \partial_x\phi = 2xz, \text{ let } \partial_y\phi = -2xz$$

$$\phi = x^2z - 2xzy$$

$$\nabla \times A = F_2 \Rightarrow$$

$$\begin{vmatrix} \hat{x} & \hat{y} & \hat{z} \\ \partial_x & \partial_y & \partial_z \\ A_x & A_y & A_z \end{vmatrix} =$$

$$\begin{cases} \partial_y A_z - \partial_z A_y = x \\ \partial_z A_x - \partial_x A_z = y \\ \partial_x A_y - \partial_y A_x = z \end{cases} \quad \text{let } A_z = 0, A = (yz + a, -xz + b, 0) \rightarrow -z + \partial_x b - y - \partial_z a = z$$

1.53

Check the divergence theorem for the function

$$\mathbf{v} = r^2 \cos \theta \hat{\mathbf{r}} + r^2 \cos \phi \hat{\boldsymbol{\theta}} - r^2 \cos \theta \sin \phi \hat{\boldsymbol{\phi}},$$

using as your volume one octant of the sphere of radius R (Fig. 1.48). Make sure you include the entire surface.

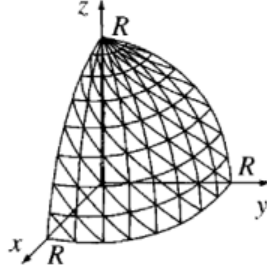


Figure 1.48

dotfill [Answer: $\pi R^4/4$] 太难了, 最多直角坐标 Divergence theorem:

$$\oint_{\mathcal{S}} E dS = \int_{\mathcal{V}} \nabla \cdot E dV$$

$$\begin{aligned} \nabla \cdot \mathbf{v} &= \frac{1}{r^2} \frac{\partial}{\partial r} (r^2 r^2 \cos \theta) + \frac{1}{r \sin \theta} \frac{\partial}{\partial \theta} (\sin \theta r^2 \cos \phi) = \frac{1}{r \sin \theta} \frac{\partial}{\partial \phi} (-r^2 \cos \theta \sin \phi) \\ &= \frac{1}{r^2} 4r^3 \cos \theta + \frac{1}{r \sin \theta} \cos \theta r^2 \cos \phi + \frac{1}{r \sin \theta} (-r^2 \cos \theta \cos \phi) \\ &= \frac{r \cos \theta}{\sin \theta} [4 \sin \theta + \cos \phi - \cos \phi] = 4r \cos \theta. \end{aligned}$$

$$\begin{aligned} \int (\nabla \cdot \mathbf{v}) d\tau &= \int (4r \cos \theta) r^2 \sin \theta dr d\theta d\phi = 4 \int_0^R r^3 dr \int_0^{\pi/2} \cos \theta \sin \theta d\theta \int_0^{\pi/2} d\phi \\ &= (R^4) \left(\frac{1}{2}\right) \left(\frac{\pi}{2}\right) = \boxed{\frac{\pi R^4}{4}}. \end{aligned}$$

Surface consists of four parts:

(1) *Curved*: $d\mathbf{a} = R^2 \sin \theta d\theta d\phi \hat{\mathbf{r}}$; $r = R$. $\mathbf{v} \cdot d\mathbf{a} = (R^2 \cos \theta) (R^2 \sin \theta d\theta d\phi)$.

$$\int \mathbf{v} \cdot d\mathbf{a} = R^4 \int_0^{\pi/2} \cos \theta \sin \theta d\theta \int_0^{\pi/2} d\phi = R^4 \left(\frac{1}{2}\right) \left(\frac{\pi}{2}\right) = \frac{\pi R^4}{4}.$$

(2) *Left*: $d\mathbf{a} = -r dr d\theta \hat{\phi}$; $\phi = 0$. $\mathbf{v} \cdot d\mathbf{a} = (r^2 \cos \theta \sin \phi) (r dr d\theta) = 0$. $\int \mathbf{v} \cdot d\mathbf{a} = 0$.

(3) *Back*: $d\mathbf{a} = r dr d\theta \hat{\phi}$; $\phi = \pi/2$. $\mathbf{v} \cdot d\mathbf{a} = (-r^2 \cos \theta \sin \phi) (r dr d\theta) = -r^3 \cos \theta dr d\theta$.

$$\int \mathbf{v} \cdot d\mathbf{a} = \int_0^R r^3 dr \int_0^{\pi/2} \cos \theta d\theta = -\left(\frac{1}{4} R^4\right) (+1) = -\frac{1}{4} R^4.$$

(4) *Bottom*: $d\mathbf{a} = r \sin \theta dr d\phi \hat{\theta}$; $\theta = \pi/2$. $\mathbf{v} \cdot d\mathbf{a} = (r^2 \cos \phi) (r dr d\phi)$.

$$\int \mathbf{v} \cdot d\mathbf{a} = \int_0^R r^3 dr \int_0^{\pi/2} \cos \phi d\phi = \frac{1}{4} R^4.$$

Total: $\oint \mathbf{v} \cdot d\mathbf{a} = \pi R^4/4 + 0 - \frac{1}{4} R^4 + \frac{1}{4} R^4 = \frac{\pi R^4}{4}$. ✓

1.54

Check Stokes' theorem using the function

$$\mathbf{v} = ay\hat{\mathbf{x}} + bx\hat{\mathbf{y}}$$

(where a and b are constants) and the circular path of radius R , centered at the origin in the xy plane. [Answer: $\pi R^2(b - a)$]

Problem 1.54

$$\nabla \times \mathbf{v} = \begin{vmatrix} \hat{\mathbf{x}} & \hat{\mathbf{y}} & \hat{\mathbf{z}} \\ \frac{\partial}{\partial x} & \frac{\partial}{\partial y} & \frac{\partial}{\partial z} \\ ay & bx & 0 \end{vmatrix} = \hat{\mathbf{z}}(b - a). \quad \text{So } \int (\nabla \times \mathbf{v}) \cdot d\mathbf{a} = (b - a)\pi R^2.$$

$\mathbf{v} \cdot d\mathbf{l} = (ay\hat{\mathbf{x}} + bx\hat{\mathbf{y}}) \cdot (dx\hat{\mathbf{x}} + dy\hat{\mathbf{y}} + dz\hat{\mathbf{z}}) = ay dx + bx dy; \quad x^2 + y^2 = R^2 \Rightarrow 2x dx + 2y dy = 0,$
 so $dy = -(x/y) dx$. So $\mathbf{v} \cdot d\mathbf{l} = ay dx + bx(-x/y) dx = \frac{1}{y}(ay^2 - bx^2) dx$.

For the "upper" semicircle, $y = \sqrt{R^2 - x^2}$, so $\mathbf{v} \cdot d\mathbf{l} = \frac{a(R^2 - x^2) - bx^2}{\sqrt{R^2 - x^2}} dx$.

$$\begin{aligned} \int \mathbf{v} \cdot d\mathbf{l} &= \int_R^{-R} \frac{aR^2 - (a+b)x^2}{\sqrt{R^2 - x^2}} dx = \left\{ aR^2 \sin^{-1}\left(\frac{x}{R}\right) - (a+b) \left[-\frac{x}{2}\sqrt{R^2 - x^2} + \frac{R^2}{2} \sin^{-1}\left(\frac{x}{R}\right) \right] \right\} \Big|_{+R}^{-R} \\ &= \frac{1}{2}R^2(a-b) \sin^{-1}(x/R) \Big|_{+R}^{-R} = \frac{1}{2}R^2(a-b) (\sin^{-1}(-1) - \sin^{-1}(+1)) = \frac{1}{2}R^2(a-b) \left(-\frac{\pi}{2} - \frac{\pi}{2}\right) \\ &= \frac{1}{2}\pi R^2(b-a). \end{aligned}$$

And the same for the lower semicircle (y changes sign, but the limits on the integral are reversed) so $\oint \mathbf{v} \cdot d\mathbf{l} = \pi R^2(b - a)$. ✓

1.60

Problem 1.60 Although the gradient, divergence, and curl theorems are the fundamental integral theorems of vector calculus, it is possible to derive a number of corollaries from them. Show that:

- (a) $\int_V (\nabla T) d\tau = \oint_S T d\mathbf{a}$. [Hint: Let $\mathbf{v} = \mathbf{c}T$, where \mathbf{c} is a constant, in the divergence theorem; use the product rules.]
- (b) $\int_V (\nabla \times \mathbf{v}) d\tau = -\oint_S \mathbf{v} \times d\mathbf{a}$. [Hint: Replace \mathbf{v} by $(\mathbf{v} \times \mathbf{c})$ in the divergence theorem.]
- (c) $\int_V [T\nabla^2 U + (\nabla T) \cdot (\nabla U)] d\tau = \oint_S (T\nabla U) \cdot d\mathbf{a}$. [Hint: Let $\mathbf{v} = T\nabla U$ in the divergence theorem.]
- (d) $\int_V (T\nabla^2 U - U\nabla^2 T) d\tau = \oint_S (T\nabla U - U\nabla T) \cdot d\mathbf{a}$. [Comment: This is known as **Green's theorem**; it follows from (c), which is sometimes called **Green's identity**.]
- (e) $\int_S \nabla T \times d\mathbf{a} = -\oint_P T d\mathbf{l}$. [Hint: Let $\mathbf{v} = \mathbf{c}T$ in Stokes' theorem.]

Problem 1.60

(a) Divergence theorem: $\oint \mathbf{v} \cdot d\mathbf{a} = \int (\nabla \cdot \mathbf{v}) d\tau$. Let $\mathbf{v} = cT$, where c is a constant vector. Using product rule #5 in front cover: $\nabla \cdot \mathbf{v} = \nabla \cdot (cT) = T(\nabla \cdot c) + c \cdot (\nabla T)$. But c is constant so $\nabla \cdot c = 0$. Therefore we have: $\int c \cdot (\nabla T) d\tau = \int Tc \cdot d\mathbf{a}$. Since c is constant, take it outside the integrals: $c \cdot \int \nabla T d\tau = c \cdot \int T d\mathbf{a}$. But c is *any* constant vector—in particular, it could be \hat{x} , or \hat{y} , or \hat{z} —so each *component* of the integral on left equals corresponding component on the right, and hence

$$\int \nabla T d\tau = \int T d\mathbf{a}. \quad \text{qed}$$

(b) Let $\mathbf{v} \rightarrow (\mathbf{v} \times c)$ in divergence theorem. Then $\int \nabla \cdot (\mathbf{v} \times c) d\tau = \int (\mathbf{v} \times c) \cdot d\mathbf{a}$. Product rule #6 $\Rightarrow \nabla \cdot (\mathbf{v} \times c) = c \cdot (\nabla \times \mathbf{v}) - \mathbf{v} \cdot (\nabla \times c) = c \cdot (\nabla \times \mathbf{v})$. (Note: $\nabla \times c = 0$, since c is constant.) Meanwhile vector identity (1) says $d\mathbf{a} \cdot (\mathbf{v} \times c) = c \cdot (d\mathbf{a} \times \mathbf{v}) = -c \cdot (\mathbf{v} \times d\mathbf{a})$. Thus $\int c \cdot (\nabla \times \mathbf{v}) d\tau = -\int c \cdot (\mathbf{v} \times d\mathbf{a})$. Take c outside, and again let c be \hat{x} , \hat{y} , \hat{z} then:

$$\int (\nabla \times \mathbf{v}) d\tau = -\int \mathbf{v} \times d\mathbf{a}. \quad \text{qed}$$

(c) Let $\mathbf{v} = T\nabla U$ in divergence theorem: $\int \nabla \cdot (T\nabla U) d\tau = \int T\nabla U \cdot d\mathbf{a}$. Product rule #(5) $\Rightarrow \nabla \cdot (T\nabla U) = T\nabla \cdot (\nabla U) + (\nabla U) \cdot (\nabla T) = T\nabla^2 U + (\nabla U) \cdot (\nabla T)$. Therefore

$$\int (T\nabla^2 U + (\nabla U) \cdot (\nabla T)) d\tau = \int (T\nabla U) \cdot d\mathbf{a}. \quad \text{qed}$$

(d) Rewrite (c) with $T \leftrightarrow U$: $\int (U\nabla^2 T + (\nabla T) \cdot (\nabla U)) d\tau = \int (U\nabla T) \cdot d\mathbf{a}$. Subtract this from (c), noting that the $(\nabla U) \cdot (\nabla T)$ terms cancel:

$$\int (T\nabla^2 U - U\nabla^2 T) d\tau = \int (T\nabla U - U\nabla T) \cdot d\mathbf{a}. \quad \text{qed}$$

(e) Stoke's theorem: $\int (\nabla \times \mathbf{v}) \cdot d\mathbf{a} = \oint \mathbf{v} \cdot d\mathbf{l}$. Let $\mathbf{v} = cT$. By Product Rule #(7): $\nabla \times (cT) = T(\nabla \times c) - c \times (\nabla T) = -c \times (\nabla T)$ (since c is constant). Therefore, $-\int (c \times (\nabla T)) \cdot d\mathbf{a} = \oint cT \cdot d\mathbf{l}$. Use vector identity #1 to rewrite the first term $(c \times (\nabla T)) \cdot d\mathbf{a} = c \cdot (\nabla T \times d\mathbf{a})$. So $-\int c \cdot (\nabla T \times d\mathbf{a}) = \oint c \cdot T d\mathbf{l}$. Pull c outside, and let $c \rightarrow \hat{x}$, \hat{y} , and \hat{z} to prove:

$$\int \nabla T \times d\mathbf{a} = -\oint T d\mathbf{l}. \quad \text{qed}$$

1.61**Problem 1.61** The integral

$$\mathbf{a} \equiv \int_S d\mathbf{a} \quad (1.106)$$

is sometimes called the **vector area** of the surface S . If S happens to be *flat*, then $|\mathbf{a}|$ is the *ordinary* (scalar) area, obviously.

- (a) Find the vector area of a hemispherical bowl of radius R .
 (b) Show that $\mathbf{a} = 0$ for any *closed* surface. [Hint: Use Prob. 1.60a.]
 (c) Show that \mathbf{a} is the same for all surfaces sharing the same boundary.
 (d) Show that

$$\mathbf{a} = \frac{1}{2} \oint \mathbf{r} \times d\mathbf{l}, \quad (1.107)$$

where the integral is around the boundary line. [Hint: One way to do it is to draw the cone subtended by the loop at the origin. Divide the conical surface up into infinitesimal triangular wedges, each with vertex at the origin and opposite side $d\mathbf{l}$, and exploit the geometrical interpretation of the cross product (Fig. 1.8).]

- (c) Show that

$$\oint (\mathbf{c} \cdot \mathbf{r}) d\mathbf{l} = \mathbf{a} \times \mathbf{c}, \quad (1.108)$$

for any constant vector \mathbf{c} . [Hint: let $T = \mathbf{c} \cdot \mathbf{r}$ in Prob. 1.60e.]

Problem 1.61

(a) $da = R^2 \sin \theta d\theta d\phi \hat{\mathbf{r}}$. Let the surface be the northern hemisphere. The $\hat{\mathbf{x}}$ and $\hat{\mathbf{y}}$ components clearly integrate to zero, and the $\hat{\mathbf{z}}$ component of $\hat{\mathbf{r}}$ is $\cos \theta$, so

$$\mathbf{a} = \int R^2 \sin \theta \cos \theta d\theta d\phi \hat{\mathbf{z}} = 2\pi R^2 \hat{\mathbf{z}} \int_0^{\pi/2} \sin \theta \cos \theta d\theta = 2\pi R^2 \hat{\mathbf{z}} \left. \frac{\sin^2 \theta}{2} \right|_0^{\pi/2} = \boxed{\pi R^2 \hat{\mathbf{z}}}$$

(b) Let $T = 1$ in Prob. 1.60(a). Then $\nabla T = 0$, so $\oint da = 0$. qed.

(c) This follows from (b). For suppose $\mathbf{a}_1 \neq \mathbf{a}_2$; then if you put them together to make a closed surface, $\oint da = \mathbf{a}_1 - \mathbf{a}_2 \neq 0$.

(d) For one such triangle, $da = \frac{1}{2}(\mathbf{r} \times d\mathbf{l})$ (since $\mathbf{r} \times d\mathbf{l}$ is the area of the parallelogram, and the direction is perpendicular to the surface), so for the entire conical surface, $\mathbf{a} = \frac{1}{2} \oint \mathbf{r} \times d\mathbf{l}$.

(e) Let $T = \mathbf{c} \cdot \mathbf{r}$, and use product rule #4: $\nabla T = \nabla(\mathbf{c} \cdot \mathbf{r}) = \mathbf{c} \times (\nabla \times \mathbf{r}) + (\mathbf{c} \cdot \nabla)\mathbf{r}$. But $\nabla \times \mathbf{r} = 0$, and $(\mathbf{c} \cdot \nabla)\mathbf{r} = (c_x \frac{\partial}{\partial x} + c_y \frac{\partial}{\partial y} + c_z \frac{\partial}{\partial z})(x \hat{\mathbf{x}} + y \hat{\mathbf{y}} + z \hat{\mathbf{z}}) = c_x \hat{\mathbf{x}} + c_y \hat{\mathbf{y}} + c_z \hat{\mathbf{z}} = \mathbf{c}$. So Prob. 1.60(e) says

$$\oint T d\mathbf{l} = \oint (\mathbf{c} \cdot \mathbf{r}) d\mathbf{l} = - \int (\nabla T) \times d\mathbf{a} = - \int \mathbf{c} \times d\mathbf{a} = -\mathbf{c} \times \int d\mathbf{a} = -\mathbf{c} \times \mathbf{a} = \mathbf{a} \times \mathbf{c}. \quad \text{qed}$$

1.62

Problem 1.62

(a) Find the divergence of the function

$$\mathbf{v} = \frac{\hat{\mathbf{r}}}{r}.$$

First compute it directly, as in Eq. 1.84. Test your result using the divergence theorem, as in Eq. 1.85. Is there a delta function at the origin, as there was for $\hat{\mathbf{r}}/r^2$? What is the general formula for the divergence of $r^n \hat{\mathbf{r}}$? [Answer: $\nabla \cdot (r^n \hat{\mathbf{r}}) = (n + 2)r^{n-1}$, unless $n = -2$, in which case it is $4\pi \delta^3(\mathbf{r})$]

(b) Find the *curl* of $r^n \hat{\mathbf{r}}$. Test your conclusion using Prob. 1.60b. [Answer: $\nabla \times (r^n \hat{\mathbf{r}}) = 0$]

Problem 1.62

(1)

$$\nabla \cdot \mathbf{v} = \frac{1}{r^2} \frac{\partial}{\partial r} \left(r^2 \cdot \frac{1}{r} \right) = \frac{1}{r^2} \frac{\partial}{\partial r} (r) = \boxed{\frac{1}{r^2}}.$$

For a sphere of radius R :

$$\left. \begin{aligned} \int \mathbf{v} \cdot d\mathbf{a} &= \int \left(\frac{1}{R} \hat{\mathbf{r}} \right) \cdot (R^2 \sin \theta d\theta d\phi \hat{\mathbf{r}}) = R \int \sin \theta d\theta d\phi = 4\pi R. \\ \int (\nabla \cdot \mathbf{v}) d\tau &= \int \left(\frac{1}{r^2} \right) (r^2 \sin \theta dr d\theta d\phi) = \left(\int_0^R dr \right) \left(\int \sin \theta d\theta d\phi \right) = 4\pi R. \end{aligned} \right\} \text{So divergence theorem checks.}$$

Evidently there is *no* delta function at the origin.

$$\nabla \times (r^n \hat{\mathbf{r}}) = \frac{1}{r^2} \frac{\partial}{\partial r} (r^2 r^n) = \frac{1}{r^2} \frac{\partial}{\partial r} (r^{n+2}) = \frac{1}{r^2} (n+2)r^{n+1} = \boxed{(n+2)r^{n-1}}$$

(except for $n = -2$, for which we already know (Eq. 1.99) that the divergence is $4\pi \delta^3(\mathbf{r})$).

(2) *Geometrically*, it should be zero. Likewise, the curl in the spherical coordinates obviously gives **zero**. To be certain there is no lurking delta function here, we integrate over a sphere of radius R , using Prob. 1.60(b): If $\nabla \times (r^n \hat{\mathbf{r}}) = 0$, then $\int (\nabla \times \mathbf{v}) d\tau = 0 \stackrel{?}{=} - \oint \mathbf{v} \times d\mathbf{a}$. But $\mathbf{v} = r^n \hat{\mathbf{r}}$ and $d\mathbf{a} = R^2 \sin \theta d\theta d\phi \hat{\mathbf{r}}$ are both in the $\hat{\mathbf{r}}$ directions, so $\mathbf{v} \times d\mathbf{a} = 0$. \checkmark

HW2

Problem 1: Electric Field in Spherical Coordinates

easy

Suppose the electric field in a region is given by $E = kr^2\hat{r}$ in spherical coordinates, where k is a constant. Find the charge density $\rho(r)$ in this region.

$$\begin{aligned}\nabla \cdot \mathbf{E} &= \frac{\rho}{\epsilon_0} \\ \nabla \cdot \mathbf{A} &= \frac{1}{r^2} \frac{\partial}{\partial r} (r^2 \cdot \mathbf{A})\end{aligned}$$

给定电场，求电荷密度

$$\begin{aligned}\rho &= \epsilon_0 \nabla \cdot \mathbf{E} = \epsilon_0 \nabla \cdot kr^2\hat{r} \\ &= \epsilon_0 \frac{1}{r^2} \frac{\partial}{\partial r} (r^2 kr^2) = \epsilon_0 \frac{1}{r^2} \cdot 4kr^3 \\ &= \boxed{4k\epsilon_0 r}\end{aligned}$$

Problem 2: Vector Potential and Magnetic Field in Cylindrical Coordinates

easy

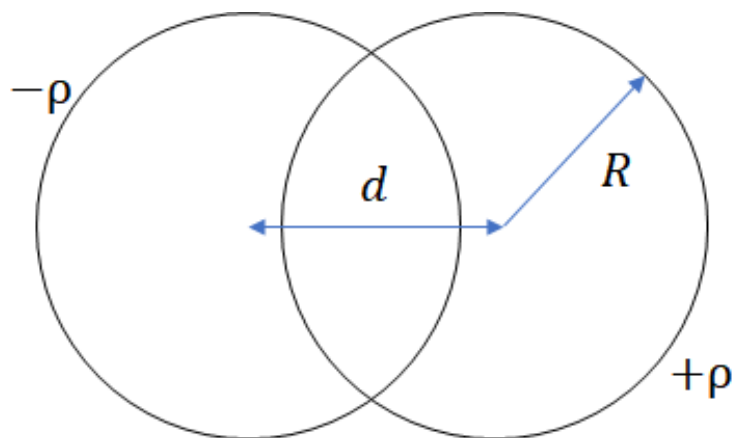
The vector potential in cylindrical coordinates is given by $\mathbf{A} = kr^2\hat{\mathbf{r}}$, where k is a constant. Find the magnetic field B generated by this vector potential.

求由矢势生成的磁场

$$\begin{aligned}\nabla \times \mathbf{A} &= \left[\frac{1}{s} \frac{\partial A_z}{\partial \phi} - \frac{\partial A_\phi}{\partial z} \right] \hat{r} + \left[\frac{\partial A_r}{\partial z} - \frac{\partial A_z}{\partial r} \right] \hat{\phi} + \frac{1}{s} \left[\frac{\partial}{\partial r} (rA_\phi) - \frac{\partial A_r}{\partial \phi} \right] \hat{z} \\ B = \nabla \times \mathbf{A} &= -\frac{\partial B_z}{\partial r} \hat{\phi} = -\frac{\partial kr^2}{\partial r} \hat{\phi} = \boxed{-2kr\hat{\phi}}\end{aligned}$$

Problem 3: Electric Field in the Overlapping Region of Two Spheres

Two spheres, each of radius R and carrying uniform charge densities $+\rho$ and $-\rho$, respectively, are placed so that they partially overlap. Let d be the vector from the center of the positive sphere to the center of the negative sphere. Show that the electric field in the region of overlap is constant, and find its value. 两球体问题：此题可能出题不完善



考虑两个半径为 R 的球体，分别携带均匀的电荷密度 $+\rho$ 和 $-\rho$ ，它们部分重叠，且 d 为从正电荷球体的中心到负电荷球体的中心的矢量。要求证明在重叠区域内的电场是恒定的，并找出其值。

首先，考虑每个球体的电场。对于球体内部的任意一点，电场的计算可以通过高斯定律来实现。高斯定律表明，对于一个带电的球体，内部的电场由其球心的电荷分布决定。由于球体的电荷密度是均匀的，可以通过高斯面来简化计算。

在每个球体内，电场的大小与距离球心的距离 r 有关，且电场的方向指向球体的电荷分布。根据高斯定律，电场 E_{sphere} 可以表示为：

$$E_{\text{sphere}} = \frac{1}{\epsilon_0} \frac{q_{\text{enclosed}}}{r^2}$$

其中 q_{enclosed} 是包围在高斯面内的电荷量。由于电荷分布是均匀的，电场在球内是从球心到外部的径向电场。

接下来，考虑两个球体的重叠区域。因为电荷分布均匀且大小相等（一个是正电荷，另一个是负电荷），我们可以通过叠加法则来求解电场。在重叠区域，由于两个球体的电场在每一点的方向相反，且大小相等，因此它们的电场将相互抵消。通过叠加法则，两个球体的电场在重叠区域内的结果是常数。

最终，通过计算，得到重叠区域内的电场是恒定的，且其值为：

$$E = \frac{2\rho d}{\epsilon_0}$$

其中 ρ 是电荷密度， d 是从正电荷球体中心到负电荷球体中心的距离， ϵ_0 是真空介电常数。

因此，在重叠区域内，电场的大小是恒定的，并且其值为 $\frac{2\rho d}{\epsilon_0}$ 。

Problem 4: Electric Field, Charge Density, and Total Chargeeasy

For the electric potential

$$V(r) = A \frac{e^{-\lambda r}}{r}$$

find the corresponding electric field $E(r)$, charge density $\rho(r)$, and total charge Q .

$$\mathbf{E} = -\nabla V; \rho = \epsilon_0 \nabla \cdot \mathbf{E}; Q = \int \rho dV$$

$$\begin{aligned} \vec{E} &= -\nabla V = -\nabla A \frac{e^{-\lambda r}}{r} \\ &= -A \left(-\frac{e^{-\lambda r}}{r^2} - \lambda \frac{e^{-\lambda r}}{r} \right) = Ae^{-\lambda r} (1+r) \frac{1}{r^2} \hat{\mathbf{r}} \end{aligned}$$

$$\rho = \epsilon_0 \nabla \cdot \mathbf{E} = A\epsilon_0 \nabla \cdot \left(e^{-\lambda r} (1+r) \frac{1}{r^2} \right)$$

=

注意有 δ 总电荷为 0, 意义是（负）电荷屏蔽

Problem 2.46

$$\mathbf{E} = -\nabla V = -A \frac{\partial}{\partial r} \left(\frac{e^{-\lambda r}}{r} \right) \hat{\mathbf{r}} = -A \left\{ \frac{r(-\lambda)e^{-\lambda r} - e^{-\lambda r}}{r^2} \right\} \hat{\mathbf{r}} = \boxed{Ae^{-\lambda r}(1 + \lambda r) \frac{\hat{\mathbf{r}}}{r^2}}.$$

$\rho = \epsilon_0 \nabla \cdot \mathbf{E} = \epsilon_0 A \left\{ e^{-\lambda r}(1 + \lambda r) \nabla \cdot \left(\frac{\hat{\mathbf{r}}}{r^2} \right) + \frac{\hat{\mathbf{r}}}{r^2} \cdot \nabla (e^{-\lambda r}(1 + \lambda r)) \right\}$. But $\nabla \cdot \left(\frac{\hat{\mathbf{r}}}{r^2} \right) = 4\pi\delta^3(\mathbf{r})$ (Eq. 1.99), and $e^{-\lambda r}(1 + \lambda r)\delta^3(\mathbf{r}) = \delta^3(\mathbf{r})$ (Eq. 1.88). Meanwhile,

$$\nabla (e^{-\lambda r}(1 + \lambda r)) = \hat{\mathbf{r}} \frac{\partial}{\partial r} (e^{-\lambda r}(1 + \lambda r)) = \hat{\mathbf{r}} \{-\lambda e^{-\lambda r}(1 + \lambda r) + e^{-\lambda r}\lambda\} = \hat{\mathbf{r}}(-\lambda^2 r e^{-\lambda r}).$$

So $\frac{\hat{\mathbf{r}}}{r^2} \cdot \nabla (e^{-\lambda r}(1 + \lambda r)) = -\frac{\lambda^2}{r} e^{-\lambda r}$, and $\boxed{\rho = \epsilon_0 A \left[4\pi\delta^3(\mathbf{r}) - \frac{\lambda^2}{r} e^{-\lambda r} \right]}$.

$$Q = \int \rho d\tau = \epsilon_0 A \left\{ 4\pi \int \delta^3(\mathbf{r}) d\tau - \lambda^2 \int \frac{e^{-\lambda r}}{r} 4\pi r^2 dr \right\} = \epsilon_0 A \left(4\pi - \lambda^2 4\pi \int_0^\infty r e^{-\lambda r} dr \right).$$

But $\int_0^\infty r e^{-\lambda r} dr = \frac{1}{\lambda^2}$, so $Q = 4\pi\epsilon_0 A \left(1 - \frac{\lambda^2}{\lambda^2} \right) = \boxed{\text{zero}}$.

中心一个点电荷，周围电荷对它形成屏蔽

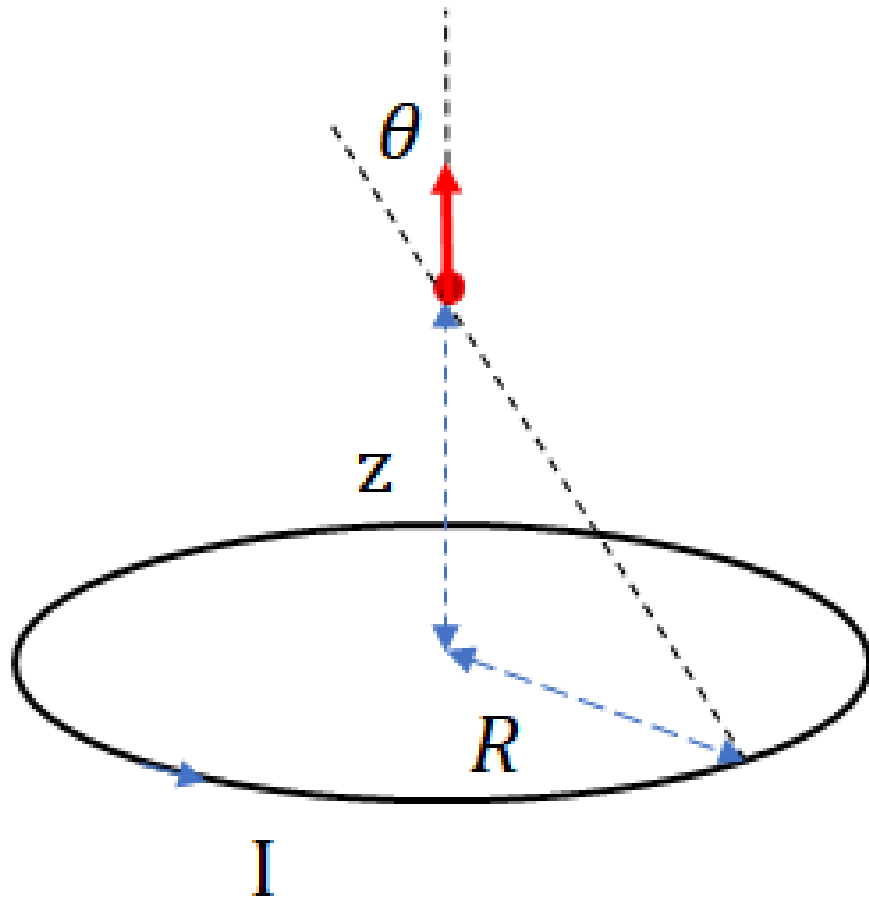
Problem 5: Magnetic Field of a Circular Current Loop

A circular loop of radius R carries a steady current I . Calculate the magnetic field at a point on the axis of the loop, a distance z from the center of the loop.

$$d\mathbf{B} = \frac{\mu_0}{4\pi} \frac{I d\mathbf{l} \times \hat{\mathbf{r}}}{r^2}$$

$$B = \frac{\mu}{4\pi} \frac{I 2\pi R}{r^2} \cos \theta = \frac{\mu I}{2r^2} \frac{z}{r} = \frac{\mu_0 I R^2}{2(R^2 + z^2)^{3/2}}$$

图片有误导，其实磁场偏角另一个方向



计算圆形环路的磁场：BS 公式

考虑一个半径为 R 的圆形电流环，携带恒定电流 I ，要求计算位于环轴线上，距离环中心为 z 的点的磁场。

根据安培环路定理，磁场可以通过计算电流元对磁场的贡献来求得。对于圆形电流环，使用比奥-萨伐尔定律来计算磁场。比奥-萨伐尔定律给出小电流元 $I d\mathbf{l}$ 在空间中某点产生的磁场 $d\mathbf{B}$ ：

$$d\mathbf{B} = \frac{\mu_0}{4\pi} \frac{I d\mathbf{l} \times \hat{\mathbf{r}}}{r^2}$$

其中 μ_0 是磁场常数, $d\mathbf{l}$ 是电流元, $\hat{\mathbf{r}}$ 是从电流元指向磁场计算点的单位向量, r 是从电流元到观察点的距离。

1. 设置坐标系

设定圆形环路位于 xy -平面内, 圆心在原点, 电流沿着环路方向流动。我们需要计算位于轴上 z -轴, 距离原点 z 的点的磁场。由于对称性, 磁场将在 z -轴方向, 并且每个电流元对磁场的贡献在 xy -平面上有一定的对称性, 最终磁场只有沿 z -轴的分量。

1. 计算磁场

对于一个圆形电流环, 磁场的大小可以通过积分得到。设定圆环上任意一点的电流元 $d\mathbf{l}$ 形成的磁场贡献为 $d\mathbf{B}$, 并且对所有电流元积分以得到总磁场。考虑到对称性, 所有电流元的垂直分量相加, 水平分量则相互抵消。最终, 沿着 z -轴的磁场分量为:

$$B_z = \frac{\mu_0 I R^2}{2(R^2 + z^2)^{3/2}}$$

其中 R 是圆形电流环的半径, I 是电流, z 是观察点到环心的距离。

最终结果

因此, 在轴上距离圆形电流环中心 z 的点的磁场大小为:

$$B_z = \frac{\mu_0 I R^2}{2(R^2 + z^2)^{3/2}}$$

Problem 6: Magnetic Field from a Finite Straight Current-Carrying Wire

A straight wire of finite length L carries a steady current I . Calculate the magnetic field at a point located a distance d directly above the center of the wire.

$$d\mathbf{B} = \frac{\mu_0}{4\pi} \frac{I d\mathbf{l} \times \hat{\mathbf{r}}}{r^2}$$

考虑一根有限长的直导线，携带恒定电流 I ，要求计算位于导线中心正上方距离为 d 的点的磁场。

2.3 载流直导线的磁场

考虑一段直导线旁任意一点 P 的磁感应强度(见图 2-18)。根据毕奥-萨伐尔定律可以看出,任意电流元 $I d\mathbf{l}$ 产生的元磁场 $d\mathbf{B}$ 的方向都一致(在 P 点垂直于纸面向内)。因此在求总磁感应强度 \mathbf{B} 的大小时,只需求 $d\mathbf{B}$ 的代数和。对于有限的一段导线 $A_1 A_2$ 来说

$$B = \int_{A_1}^{A_2} dB = \frac{\mu_0}{4\pi} \int_{A_1}^{A_2} \frac{I dl \sin\theta}{r^2}$$

从场点 P 作直导线的垂线 PO , 设它的长度为 r_0 , 以垂足 O 为原点, 设电流元 $d\mathbf{l}$ 到 O 的距离为 l , 由图 2-18 可以看出:

$$l = r \cos(\pi - \theta) = -r \cos\theta,$$

$$r_0 = r \sin(\pi - \theta) = r \sin\theta.$$

由此消去 r , 得 $l = r_0 \cot\theta$, 取微分:

$$dl = \frac{r_0 d\theta}{\sin^2\theta}$$

将上面的积分变量 l 换为 θ 后得到

$$B = \frac{\mu_0}{4\pi} \int_{\theta_1}^{\theta_2} \frac{I \sin\theta d\theta}{r_0} = \frac{\mu_0 I}{4\pi r_0} (\cos\theta_1 - \cos\theta_2), \quad (2.27)$$

式中 θ_1 、 θ_2 分别为 θ 角在 A_1 、 A_2 两端的数值。

若导线为无限长, $\theta_1 = 0$, $\theta_2 = \pi$, 则

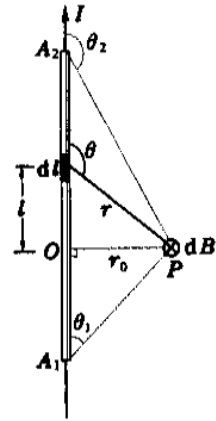


图 2-18 求载流直导线的磁场

图 1: 赵凯华·电磁学

解答

假设导线的长度为 L , 电流 I 恒定, 计算磁场时可以使用比奥-萨伐尔定律。比奥-萨伐尔定律表达了由于一个小电流元 $I d\mathbf{l}$ 在空间中产生的磁场 $d\mathbf{B}$:

$$d\mathbf{B} = \frac{\mu_0 I}{4\pi} \frac{d\mathbf{l} \times \hat{\mathbf{r}}}{r^2}$$

其中 μ_0 是磁场常数, $d\mathbf{l}$ 是电流元, $\hat{\mathbf{r}}$ 是从电流元指向磁场计算点的单位向量, r 是从电流元到观察点的距离。

1. 设置坐标系与符号

- 设导线位于 x -轴上, 从 $x = -L/2$ 到 $x = L/2$, 观察点位于 $x = 0$ 轴上方 $y = d$ 处。
- 对于一个小电流元 $d\mathbf{l}$, 在 x -轴上指向 x 方向, 电流元的长度为 dx , 因此 $d\mathbf{l} = dx\hat{\mathbf{x}}$ 。

2. 磁场的计算

- 从比奥-萨伐尔定律得到磁场的表达式。电流元到观察点的距离 r 为:

$$r = \sqrt{x^2 + d^2}$$

- 小电流元 $d\mathbf{l} = dx\hat{\mathbf{x}}$ 和单位向量 $\hat{\mathbf{r}}$ 的叉积 $d\mathbf{l} \times \hat{\mathbf{r}}$ 为:

$$d\mathbf{l} \times \hat{\mathbf{r}} = dx\hat{\mathbf{x}} \times \frac{1}{\sqrt{x^2 + d^2}} \left(-\frac{x}{\sqrt{x^2 + d^2}}\hat{\mathbf{x}} + \frac{d}{\sqrt{x^2 + d^2}}\hat{\mathbf{y}} \right)$$

计算叉积得到的结果为:

$$d\mathbf{l} \times \hat{\mathbf{r}} = \frac{d dx}{(x^2 + d^2)^{3/2}}\hat{\mathbf{y}}$$

因此, 磁场的增量为:

$$dB = \frac{\mu_0 I}{4\pi} \frac{d dx}{(x^2 + d^2)^{3/2}}$$

3. 积分计算磁场

对于 x 从 $-L/2$ 到 $L/2$ 的积分，得到总磁场：

$$B = \frac{\mu_0 I d}{4\pi} \int_{-L/2}^{L/2} \frac{dx}{(x^2 + d^2)^{3/2}}$$

这个积分可以通过标准积分公式求解，结果为：

$$B = \frac{\mu_0 I}{4\pi d} \left[\frac{x}{d\sqrt{x^2 + d^2}} \right]_{-L/2}^{L/2}$$

代入边界条件，最终结果为：

$$B = \frac{\mu_0 I}{4\pi d} \left(\frac{L/2}{d\sqrt{(L/2)^2 + d^2}} - \left(-\frac{L/2}{d\sqrt{(L/2)^2 + d^2}} \right) \right)$$

进一步简化后得到磁场表达式：

$$B = \frac{\mu_0 I}{2\pi d} \cdot \frac{L/2}{\sqrt{(L/2)^2 + d^2}}$$

最终结果

磁场在距离导线中心正上方 d 的点的大小为：

$$B = \frac{\mu_0 I L}{2\pi d \sqrt{(L/2)^2 + d^2}}$$

延伸电流方向上一点无磁场

HW3

Problem 1: Prove the Mean Value Theorem for the 2D Laplace Equation: hard

Prove that for any harmonic function $\phi(x, y)$ that satisfies the 2D Laplace equation $\nabla^2\phi = 0$, the value of ϕ at any point is equal to the average of its values over a circle centered at that point.

.....

乱凑法

$$\begin{aligned}\Phi &= \int_0^{2\pi} \phi d\theta \\ \phi(x_0 + r \sin \theta, y_0 + r \cos \theta) &= \phi(x_0, y_0) + r(\phi_x \cos \theta + \phi_y \sin \theta) + o(R^2) \\ \Phi &= \int_0^{2\pi} \phi_0 + r(\phi_x \cos \theta + \phi_y \sin \theta) d\theta \\ &= \int_0^{2\pi} \phi_0 d\theta\end{aligned}$$

Taylor 展开: 结果中积分为 0, 只剩下 ϕ_0 项。

天才做法

To prove the Mean Value Theorem for the 2D Laplace equation, we proceed as follows:

1. **Laplace Equation:** In two dimensions, the Laplace equation is given by:

$$\nabla^2\phi(x, y) = \frac{\partial^2\phi}{\partial x^2} + \frac{\partial^2\phi}{\partial y^2} = 0$$

1. **Introduce Green's Function:** We use the Green's function $G(\mathbf{r}, \mathbf{r}_0)$, which satisfies:

$$\nabla^2 G(\mathbf{r}, \mathbf{r}_0) = -\delta(\mathbf{r} - \mathbf{r}_0)$$

In 2D, the Green's function is:

$$G(\mathbf{r}, \mathbf{r}_0) = \frac{1}{2\pi} \ln \frac{1}{|\mathbf{r} - \mathbf{r}_0|}$$

1. **Green's First Identity:** Applying Green's first identity, we have:

$$\int_V (\phi \nabla^2 G + G \nabla^2 \phi) dA = \oint_{\partial V} \left(\phi \frac{\partial G}{\partial n} - G \frac{\partial \phi}{\partial n} \right) ds$$

Since $\nabla^2 \phi = 0$, this simplifies to:

$$\int_V \phi \nabla^2 G dA = \oint_{\partial V} \left(\phi \frac{\partial G}{\partial n} \right) ds$$

1. **Left Side Simplification:** Using $\nabla^2 G = -\delta(\mathbf{r} - \mathbf{r}_0)$, the left side becomes $\phi(\mathbf{r}_0)$.
2. **Boundary Integral:** Since $G = \frac{1}{2\pi} \ln \frac{1}{R}$ on the boundary, the normal derivative $\frac{\partial G}{\partial n} = -\frac{1}{2\pi R}$, and the boundary integral becomes:

$$\oint_{\partial V} \phi \frac{\partial G}{\partial n} ds = -\frac{1}{2\pi R} \oint_{\partial V} \phi ds$$

1. **Conclusion:** Thus, we find that:

$$\phi(\mathbf{r}_0) = \frac{1}{2\pi R} \oint_{\partial V} \phi ds$$

This proves that the value of ϕ at \mathbf{r}_0 is the average of its values on the circle.

Problem 2: Image Charge Problem for a Point Charge Inside a Spherical Conducting Shell:

Consider a conducting spherical shell with radius R . A point charge q is placed inside the shell at a distance d from the center. Find the image charge configuration and determine the potential distribution inside the shell.

..... 球内任意位置场强

1. Setup: Consider a spherical conducting shell with radius R , and a point charge q located at a distance d from the center.
2. Image Charge: To satisfy the boundary condition that the potential on the conducting shell's surface is zero, we place an image charge $q' = -q R/d$ at a distance R^2/d from the center, on the same axis as the real charge.
3. Potential Distribution: The potential at a point r inside the shell is given by the superposition of the potentials due to the real and image charges:

$$\phi(\vec{r}) = \frac{q}{|\vec{r} - \vec{r}_q|} + \frac{q'}{|\vec{r} - \vec{r}'_q|}$$

where $r_q = (0, 0, d)$ and $r'_q = (0, 0, R^2/d)$.

1. Result: This configuration ensures that the potential on the surface of the shell is zero and provides the correct potential inside the shell.

Problem 3: Fourier Transform of Dirac Delta Function and Heaviside Step Function:

Find the Fourier transforms of the Dirac delta function $\delta(x)$ the Heaviside step function $H(x)$.

..... 傅里叶

$$\begin{aligned} \mathcal{F}(\delta(x)) &= \int_{-\infty}^{\infty} \delta(x)e^{-i\omega x} dx = \boxed{1} \\ \mathcal{F}(H) &= \int_{-\infty}^{\infty} H(x) \exp(-i\omega x) dx = \int_0^{\infty} \exp(-i\omega x) dx \\ &= \frac{-1}{i\omega} \exp(-i\omega x) \Big|_0^{\infty} = \boxed{\frac{1}{i\omega} (+\pi\delta(k))} \end{aligned}$$

()里的项是答案没有但, 前面积分不收敛专门去查的

第一项: 它表示阶梯函数 $H(x)$ 对于非零频率 k 的贡献, 反映了它的非平滑性质。

第二项: 这是由于阶梯函数在 $x=0$ 处的不连续跳跃, 产生了在 $k=0$ 处的 **delta** 函数贡献。

——GPT

Problem 4: Potential Distribution Inside a Cube

A cube with conducting walls has one face at a constant potential V_0 while all other faces are grounded (at zero potential). Find the potential distribution inside the cube.

.....
解 Laplace 方程: 分离变量: 对 xyz; 方块的边界条件

$$\nabla^2 \phi = \frac{\partial^2 \phi}{\partial x^2} + \frac{\partial^2 \phi}{\partial y^2} + \frac{\partial^2 \phi}{\partial z^2} = 0$$

$$\phi(x, y, z) = X(x)Y(y)Z(z) \rightarrow$$

$$\frac{X''(x)}{X(x)} = -k_x^2, \quad \frac{Y''(y)}{Y(y)} = -k_y^2, \quad \frac{Z''(z)}{Z(z)} = k_x^2 + k_y^2$$

$$\Rightarrow \begin{cases} X(x) = \sin\left(\frac{n\pi x}{a}\right), \\ Y(y) = \sin\left(\frac{m\pi y}{a}\right) \\ Z(z) = e^{\sqrt{k_x^2 + k_y^2}z/a} - e^{-\sqrt{k_x^2 + k_y^2}z/a} = 2 \sinh\left(\frac{\sqrt{k_x^2 + k_y^2}}{a}z\right) \end{cases}$$

$$\phi = \sum_{n=1}^{\infty} \sum_{m=1}^{\infty} A_{nm} \sin\left(\frac{n\pi x}{a}\right) \sin\left(\frac{m\pi y}{a}\right) \left(e^{\sqrt{n^2 + m^2}\pi z/a} - e^{-\sqrt{n^2 + m^2}\pi z/a}\right)$$

$$\left\{ \begin{array}{l} \phi(x, y, 0) = V_0, \\ \phi(x, y, z = a) = \phi(x = a, y, z) = \phi(x, y = 0, z) = \phi(x, y = a, z) = 0 \end{array} \right.$$

$$V_0 = \sum_{n=1}^{\infty} \sum_{m=1}^{\infty} A_{nm} \sin\left(\frac{n\pi x}{a}\right) \sin\left(\frac{m\pi y}{a}\right)$$

$$A_{nm} = \frac{4V_0}{nm\pi^2}$$

?

$$\phi(x, y, z) = \frac{4V_0}{\pi^2} \sum_{n=1}^{\infty} \sum_{m=1}^{\infty} \frac{\sin\left(\frac{n\pi x}{a}\right) \sin\left(\frac{m\pi y}{a}\right)}{nm} \left(e^{\sqrt{n^2 + m^2}\pi z/a} - e^{-\sqrt{n^2 + m^2}\pi z/a}\right)$$

Boundary Conditions

$$\phi(x, y, 0) = V_0, \phi(x, y, z = a) = \phi(x = a, y, z) = \phi(x, y = 0, z) = \phi(x, y = a, z) = 0$$

Separation of Variables Assumption

$$\phi(x, y, z) = X(x)Y(y)Z(z)$$

Separated Equations

$$\frac{X''(x)}{X(x)} = -k_x^2, \quad \frac{Y''(y)}{Y(y)} = -k_y^2, \quad \frac{Z''(z)}{Z(z)} = k_x^2 + k_y^2$$

Solutions for X(x) and Y(y)

$$X(x) = \sin\left(\frac{n\pi x}{a}\right), \quad Y(y) = \sin\left(\frac{m\pi y}{a}\right)$$

n, m are positive integers

Solution for Z(z)

$$Z(z) = A_{nm} \left(e^{\sqrt{k_x^2 + k_y^2} z/a} - e^{-\sqrt{k_x^2 + k_y^2} z/a} \right)$$

Complete Solution

$$\phi(x, y, z) = \sum_{n=1}^{\infty} \sum_{m=1}^{\infty} A_{nm} \sin\left(\frac{n\pi x}{a}\right) \sin\left(\frac{m\pi y}{a}\right) \left(e^{\sqrt{n^2 + m^2} \pi z/a} - e^{-\sqrt{n^2 + m^2} \pi z/a} \right)$$

Boundary Condition to Determine Coefficients A_{nm}

$$V_0 = \sum_{n=1}^{\infty} \sum_{m=1}^{\infty} A_{nm} \sin\left(\frac{n\pi x}{a}\right) \sin\left(\frac{m\pi y}{a}\right)$$

Coefficients A_{nm}

$$A_{nm} = \frac{4V_0}{nm\pi^2}$$

Final Result

$$\phi(x, y, z) = \frac{4V_0}{\pi^2} \sum_{n=1}^{\infty} \sum_{m=1}^{\infty} \frac{\sin\left(\frac{n\pi x}{a}\right) \sin\left(\frac{m\pi y}{a}\right)}{nm} \left(e^{\sqrt{n^2 + m^2} \pi z/a} - e^{-\sqrt{n^2 + m^2} \pi z/a} \right)$$

Problem 5: Potential and Surface Charge Distribution for a Sphere with Surface Potential

A spherical shell has a surface potential given by $V(\theta) = \cos^2 \theta$. Find the potential distribution both inside and outside the sphere using the method of separation of variables. Also, compute the surface charge density on the sphere. 答案不正确：请匹配 cos 和 P

Laplace 方程；求电荷 $\phi \rightarrow \sigma$

$$\nabla^2 V = 0$$

$$\frac{\partial}{\partial r} \left[r^2 \frac{\partial V}{\partial r} \right] + \frac{1}{\sin \theta} \frac{\partial}{\partial \theta} \left[\sin \theta \frac{\partial V}{\partial \theta} \right] = 0$$

$$V(r, \theta) = R(r)\Theta(\theta)$$

$$\Theta \frac{\partial}{\partial r} \left[r^2 \frac{dR}{dr} \right] + \frac{R}{\sin \theta} \frac{\partial}{\partial \theta} \left[\sin \theta \frac{d\Theta}{d\theta} \right] = 0$$

$$\rightarrow \frac{1}{R} \frac{\partial}{\partial r} \left[r^2 \frac{dR}{dr} \right] = \frac{1}{\Theta \sin \theta} \frac{\partial}{\partial \theta} \left[\sin \theta \frac{d\Theta}{d\theta} \right] = -l(l+1)$$

...

$$R = A_l r^l + B_l r^{-(l+1)}, \Theta = P_l(\cos \theta)$$

$$r = R, V = \cos^2 \theta = \frac{2}{3} P_2 + \frac{1}{3} P_0$$

$$\phi = \begin{cases} \frac{2}{3} \frac{r^2}{R^2} P_2 \\ \frac{1}{3} \frac{R}{r} + \frac{2}{3} \frac{r^3}{R^3} P_2 \end{cases}$$

$$\sigma = -\epsilon \left(\frac{\partial \phi_o}{\partial r} - \frac{\partial \phi_i}{\partial r} \right)_{r=R}$$

= ...

$$= \boxed{-\epsilon \frac{2}{R} \cos \theta}$$

The general solution is:

$$V_{\text{out}}(r, \theta) = \sum_{l=0}^{\infty} \left(A_l r^{-l-1} \right) P_l(\cos \theta),$$

where P_l are the Legendre polynomials.

Inside the Sphere ($r \leq R$): The general solution is:

$$V_{\text{in}}(r, \theta) = \sum_{l=0}^{\infty} \left(B_l r^l \right) P_l(\cos \theta).$$

Boundary Conditions:

1. Continuity of potential at $r = R$: $V_{\text{in}}(R, \theta) = V_{\text{out}}(R, \theta) = \cos^2 \theta$.
2. Surface charge implies discontinuity in the radial derivative:

$$\epsilon_0 \left. \frac{\partial V_{\text{out}}}{\partial r} \right|_{r=R} - \epsilon_0 \left. \frac{\partial V_{\text{in}}}{\partial r} \right|_{r=R} = \sigma(\theta).$$

Using $\cos^2 \theta = \frac{2}{3} P_2(\cos \theta) + \frac{1}{3} P_0(\cos \theta)$, we find:

$$A_0 = \frac{R}{3}, \quad A_2 = \frac{2R^3}{15}, \quad B_0 = \frac{1}{3}, \quad B_2 = \frac{2R^3}{15}.$$

Thus:

$$\begin{cases} V_{\text{out}}(r, \theta) = \frac{R}{3r} + \frac{2R^3}{15r^3} P_2(\cos \theta), \\ V_{\text{in}}(r, \theta) = \frac{1}{3} + \frac{2r^2}{15} P_2(\cos \theta). \end{cases}$$

The surface charge density is:

$$\sigma(\theta) = \epsilon_0 \left(\left. \frac{\partial V_{\text{out}}}{\partial r} - \frac{\partial V_{\text{in}}}{\partial r} \right) \right|_{r=R}.$$

Substituting the expressions for V_{out} and V_{in} :

$$\sigma(\theta) = \epsilon_0 \left(-\frac{R}{3} - \frac{4R}{15} P_2(\cos \theta) \right).$$

Using $P_2(\cos \theta) = \frac{1}{2}(3 \cos^2 \theta - 1)$, the result is:

$$\sigma(\theta) = -\frac{\epsilon_0 R}{15} (5 + 4(3 \cos^2 \theta - 1)) = \frac{\epsilon_0 R}{15} (3 - 12 \cos^2 \theta).$$

类似题 A spherical shell has a surface potential given by $V(\theta) = \cos 2\theta$. Find the potential distribution both inside and outside the sphere using the method of separation of variables. Also, compute the surface charge density on the sphere. ? 可能有错

5. Potential and Surface Charge Distribution for a Sphere with Surface Potential $V(\theta) = \cos^2 \theta$

1. Laplace Equation in Spherical Coordinates: The Laplace equation in spherical coordinates is:

$$\nabla^2 \phi = \frac{1}{r^2} \frac{\partial}{\partial r} \left(r^2 \frac{\partial \phi}{\partial r} \right) + \frac{1}{r^2 \sin \theta} \frac{\partial}{\partial \theta} \left(\sin \theta \frac{\partial \phi}{\partial \theta} \right) = 0$$

2. Separation of Variables: Assuming $\phi(r, \theta) = R(r)\Theta(\theta)$, the solutions for $R(r)$ and $\Theta(\theta)$ are:

$$R(r) = A_1 r^l + B_1 r^{-(l+1)}, \quad \Theta(\theta) = P_l(\cos \theta)$$

3. Boundary Conditions: On the surface of the sphere $r = R$, the potential is $V(\theta) = \cos^2 \theta$, which can be expanded as:

$$\cos^2 \theta = \frac{2}{3} P_2(\cos \theta) + \frac{1}{3} P_0(\cos \theta)$$

4. Solution for Potential: - Inside the sphere:

$$\phi_{\text{in}}(r, \theta) = \frac{1}{3} + \frac{2}{3} \frac{r^2}{R^2} P_2(\cos \theta)$$

- Outside the sphere:

$$\phi_{\text{out}}(r, \theta) = \frac{1}{3} \frac{R}{r} + \frac{2}{3} \frac{R^3}{r^3} P_2(\cos \theta)$$

5. Surface Charge Distribution: The surface charge density is given by:

$$\sigma(\theta) = -\epsilon_0 \left(\frac{\partial \phi_{\text{out}}}{\partial r} - \frac{\partial \phi_{\text{in}}}{\partial r} \right)_{r=R}$$

This results in:

$$\sigma(\theta) = -\epsilon_0 \frac{2}{R} \cos \theta$$

Problem 6: Dipole Moment of a Sphere with Surface Charge Density:

A spherical shell of radius R has a surface charge density $\sigma(\theta) = \sigma_0 \cos \theta$. Find the dipole moment of the system.

$\sigma \rightarrow p$ 三维面积元

.....

$$\begin{aligned}
\vec{p} &= \int \sigma \vec{r} dS \\
p_z &= R^3 \int (\sigma_0 \cos \theta) \cos \theta \sin \theta d\theta d\phi \\
&= \sigma_0 R^3 \int_0^\pi d\phi \int_0^{2\pi} \cos \theta \sin \theta d\theta = \sigma_0 R^3 \cdot 2\pi \int_{-1}^1 u^2 du \\
&= \frac{4}{3} R^3 \sigma_0
\end{aligned}$$

HW4

Problem 1: Electric Dipole Moment of a Charge Configuration

Consider a system where four point charges are placed at the vertices of a cube. The charges are $q_1 = +e$, $q_2 = -2e$, $q_3 = +e$, and $q_4 = -e$, with a side length of a . Calculate the electric dipole moment p of this system, and analyze the direction of the dipole moment.

此题可能出题不完善

$$p = \sum_j q_j r_j$$

Problem 2: Magnetic Dipole Moment of a Surface Current on a Sphere

A spherical conductor has a surface current density that varies with latitude angle θ . The current density is given by $K(\theta) = K_0 \sin^2(\theta)$, where K_0 is the maximum current density at the equator, and θ is the latitude angle. Calculate the magnetic dipole moment \mathbf{m} of this spherical conductor. [Hint: Use the formula $\mathbf{m} = \frac{1}{2} \int_{\mathbf{S}} \mathbf{r} \times \mathbf{K} dS$ and exploit the spherical symmetry to simplify the computation.]

就是用公式算积分

说要再乘 $\sin\theta$ 因为叉乘 (题目没写明白方向)

$$= \sin^4\theta \frac{1}{2}r^3 K_0 \dots = \frac{3}{8}\pi^2 r K_0 \hat{\mathbf{z}}$$

下面没乘

$$dS = r^2 \sin\theta d\theta d\phi$$

$$\begin{aligned} \mathbf{m} &= \frac{1}{2} \int_{\mathbf{S}} \mathbf{r} \times \mathbf{K} dS \\ &= \frac{1}{2} r^3 K_0 \int_0^{2\pi} d\phi \int_0^\pi \sin^3\theta d\theta = \frac{1}{2} r^3 K_0 2\pi \frac{4}{3} \\ &= \frac{4}{3} \pi r^3 K_0 \hat{\mathbf{z}} \end{aligned}$$

Problem 3: Energy Stored in a Spherical Capacitor

Consider a spherical capacitor consisting of two concentric spherical conducting shells. The inner shell has radius R_1 and the outer shell has radius R_2 . The space between the shells is filled with a dielectric of constant ϵ_r . The potential difference between the shells is V .

(a) Derive the expression for the capacitance C of this spherical capacitor.

(b) Calculate the energy stored in the capacitor using the formula $W = \frac{1}{2} CV^2$.

(c) Verify the result by calculating the energy stored in the electric field using the energy density $w = \frac{\epsilon_0 \epsilon_r}{2} E^2$

球壳的电容 | 代公式算能量

$$\begin{aligned} C &= \frac{Q}{V} = \frac{Q}{\int_{R_1}^{R_2} Q/4\pi\epsilon_0 r^2} = \frac{4\pi\epsilon_0}{\frac{1}{R_1} - \frac{1}{R_2}} \\ &= \boxed{4\pi\epsilon_0 \frac{R_1 R_2}{R_2 - R_1}} \end{aligned}$$

$$\begin{aligned} W &= \frac{1}{2} CV^2 = \frac{1}{2} 4\pi\epsilon_0 \frac{R_1 R_2}{R_2 - R_1} V^2 \\ &= \boxed{2\pi\epsilon_0 V^2 \frac{R_1 R_2}{R_2 - R_1}} \end{aligned}$$

$$\begin{aligned}
W &= \int w dV = \int_{R_1}^{R_2} \left(\frac{\epsilon_0 \epsilon_r}{2} E^2 \right) 4\pi r^2 dr \\
&= \frac{1}{2} \int_{R_1}^{R_2} \frac{\epsilon_0 \epsilon_r}{2} \left(\frac{Q}{4\pi \epsilon r^2} \right)^2 4\pi r^2 dr = \\
&= \frac{Q^2}{8\pi \epsilon_r \epsilon_0} \left(\frac{1}{R_1} - \frac{1}{R_2} \right) = \frac{1}{2} CV^2
\end{aligned}$$

Problem 4: Dielectric Sphere in a Uniform External Electric Field

Consider a dielectric sphere of radius R and dielectric constant ϵ_r , placed in a uniform external electric field E_0 . The external field is along the z -axis.

(a) Solve for the electric potential both inside and outside the dielectric sphere.

(b) Calculate the induced dipole moment of the sphere.

考虑一个半径为 R ，介电常数为 ϵ_r 的电介质球，置于一个均匀外电场 \mathbf{E}_0 中，外电场沿 z 轴方向。求解：

1. 球内和球外的电势。
2. 计算球的感应偶极矩。

首先，假设电场为静电场，因此可以使用泊松方程和拉普拉斯方程来求解电势。

(a) 电势的解

在球外 $r > R$ 区域，电势满足拉普拉斯方程。由于球对称性，外部电势可以写作：

$$V_{\text{out}}(r) = -E_0 r \cos \theta + \frac{A}{r}$$

其中 E_0 是外部电场的大小， A 是常数，需要通过边界条件来确定。在球面 $r = R$ 处，要求电势的连续性，因此有：

$$V_{\text{out}}(R) = V_{\text{in}}(R)$$

球内的电势 $r < R$ 区域，由于球内是线性介质，电势满足泊松方程：

$$\nabla^2 V_{\text{in}} = 0$$

因此，电势在球内为：

$$V_{\text{in}}(r) = Br \cos \theta$$

由边界条件 $V_{\text{in}}(R) = V_{\text{out}}(R)$ 和电场的连续性条件（即 $\mathbf{E} = -\nabla V$ 在界面处连续），我们可以求出常数 A 和 B 的值。最终，得到球内和球外的电势为：

$$V_{\text{in}}(r) = \frac{3\epsilon_r}{\epsilon_r + 2} E_0 r \cos \theta$$
$$V_{\text{out}}(r) = -E_0 r \cos \theta + \frac{E_0 R^3 (\epsilon_r - 1)}{2(\epsilon_r + 2) r^2}$$

(b) 感应偶极矩

感应偶极矩可以通过球内电场的极化计算得到。球内的极化为：

$$\mathbf{P} = \epsilon_0 (\epsilon_r - 1) \mathbf{E}$$

由于球的对称性，极化仅在球内沿着 z 轴方向，感应偶极矩为：

$$\mathbf{p} = \int \mathbf{P} dV = \frac{4}{3} \pi R^3 \epsilon_0 (\epsilon_r - 1) E_0$$

因此，感应偶极矩为：

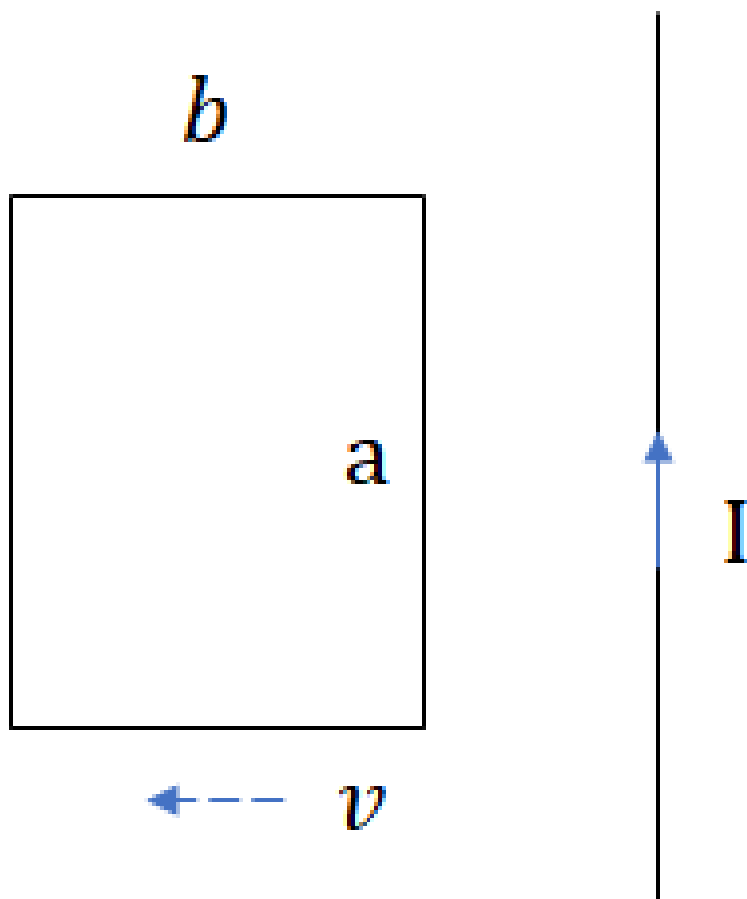
$$\mathbf{p} = \frac{4}{3} \pi R^3 \epsilon_0 (\epsilon_r - 1) E_0$$

Hw5

答案不完整请谅解

Problem 1: Magnetic Flux and Induced EMF in a Rectangular Loop Near a Long Straight Current-Carrying Wire

A rectangular loop of wire with side lengths a and b lies on a table, with the side of length a parallel to a very long straight wire carrying a current I . The closest side of the loop is a distance s from the wire. Find the magnetic flux through the loop. If the loop is pulled away from the wire at a constant speed v , find the induced emf in the loop and the direction of the induced current.



$$\begin{aligned}
B &= \frac{\mu I}{2\pi s} \\
\Phi &= \int B dS = \frac{\mu I}{2\pi} \int_s^{s+b} \frac{1}{s} (b ds) \\
&= \frac{\mu I}{2\pi} \ln\left(\frac{s+b}{s}\right) \\
\varepsilon &= -\frac{d\Phi}{dt} = \frac{\mu I}{2\pi} \frac{d}{dt} \ln\left(\frac{s+b}{s}\right) \\
&= \frac{\mu I b^2 v}{2\pi s(s+b)}
\end{aligned}$$

Problem 2: Mutual Inductance of a Small Loop Above a Large Loop

A small loop of wire with radius a is positioned a distance z above the center of a large loop with radius b . The planes of the two loops are parallel and perpendicular to their common axis. Given that the field of the large loop can be treated as nearly constant over the small loop, calculate the mutual inductance of this configuration.

$$M = \frac{\mu_0 I \pi a^2 b^2}{2(b^2 + z^2)^{\frac{3}{2}}}$$

Problem 3: RLC Circuit

Consider an LRC circuit containing an inductor L , a resistor R , and a capacitor C . Derive the differential equation describing the voltage across the capacitor as a function of time, and solve for the voltage $V(t)$ across the capacitor if the initial charge is Q_0 .

$$\begin{aligned}
L \frac{d^2 Q}{dt^2} + R \frac{dQ}{dt} + \frac{Q}{C} &= 0 \\
LC \frac{d^2 V}{dt^2} + RC \frac{dV}{dt} + V &= 0
\end{aligned}$$

设 $V(t) = e^{\lambda t}$, 代入方程得特征方程:

$$LC\lambda^2 + RC\lambda + 1 = 0$$

解出特征根:

$$\lambda = \frac{-R \pm \sqrt{R^2 - 4L/C}}{2L}$$

分三种情况讨论:

1. 过阻尼 ($R^2 > 4L/C$): $V(t) = Ae^{\lambda_1 t} + Be^{\lambda_2 t}$, λ_1, λ_2 为实根
2. 临界阻尼 ($R^2 = 4L/C$): $V(t) = (A + Bt)e^{\lambda t}$, $\lambda = -\frac{R}{2L}$
3. 欠阻尼 ($R^2 < 4L/C$): $V(t) = e^{-\frac{R}{2L}t} (A \cos(\omega t) + B \sin(\omega t))$, $\omega = \sqrt{\frac{1}{LC} - \frac{R^2}{4L^2}}$

Problem 4: Poynting Vector in a Vibrating Parallel Plate Capacitor

A parallel plate capacitor is charged to a constant charge Q , with the separation between plates varying as $d(t) = d_0 + \omega \sin(\varepsilon t)$, where $\omega \rightarrow d_0$. Using the time-varying electric field, derive the time-averaged Poynting vector \mathbf{S} in the region between the plates. Analyze how the energy transfer rate changes with the frequency ω and amplitude δ .

$$S = \frac{Q^2 \omega \varepsilon}{2\pi \varepsilon A^2 \varepsilon_0} \cos \varepsilon t$$
$$\langle S \rangle = 0$$

While the average power flow is zero, the peak rate of energy transfer increases with both the frequency and the amplitude. With plate oscillations, indicating stronger instantaneous energy flow between the plates with higher ε and ω

Problem 5: Reflection and Transmission of a Plane Wave on a Dielectric Film

Derive the reflection and transmission coefficients for a monochromatic plane wave normally incident on a thin film of thickness d , dielectric constant ϵ , and magnetic permeability μ . Consider both dielectric and magnetic properties and discuss the conditions for constructive and destructive interference in the reflected and transmitted waves.

$$\delta = 2n\pi, d = n\frac{\lambda}{2} \quad \text{constructive}$$

$$\delta = (2n+1)\pi, d = (n + \frac{1}{2})\frac{\lambda}{2} \quad \text{destructive}$$

设入射波为 $E_i = E_0 e^{i(k_1 z - \omega t)}$, 入射介质参数为 (ϵ_1, μ_1) 薄膜内的传播波为 $E_t = E_1 e^{i(k_2 z - \omega t)} + E_2 e^{-i(k_2 z - \omega t)}$, 薄膜参数为 (ϵ_2, μ_2) 透射波为 $E_r = E_t e^{i(k_3 z - \omega t)}$, 透射介质参数为 (ϵ_3, μ_3) $k_i = \omega \sqrt{\mu_i \epsilon_i}$, $i = 1, 2, 3$

- 边界条件 1: 在 $z = 0$, 电场和磁场连续性:

$$E_0 + E_r = E_1 + E_2, \quad \frac{1}{\mu_1}(E_0 - E_r) = \frac{1}{\mu_2}(E_1 - E_2).$$

- 边界条件 2: 在 $z = d$, 电场和磁场连续性:

$$E_1 e^{ik_2 d} + E_2 e^{-ik_2 d} = E_t e^{ik_3 d}, \quad \frac{1}{\mu_2}(E_1 e^{ik_2 d} - E_2 e^{-ik_2 d}) = \frac{1}{\mu_3} E_t e^{ik_3 d}.$$

解方程组得到反射系数 r 和透射系数 t :

$$r = \frac{(Z_2 - Z_1)(Z_3 + Z_2 e^{-2ik_2 d})}{(Z_2 + Z_1)(Z_3 + Z_2 e^{-2ik_2 d})}, \quad t = \frac{2Z_3 Z_2}{(Z_2 + Z_1)(Z_3 + Z_2 e^{-2ik_2 d})}.$$

$$Z_i = \sqrt{\frac{\mu_i}{\epsilon_i}}, \quad i = 1, 2, 3.$$

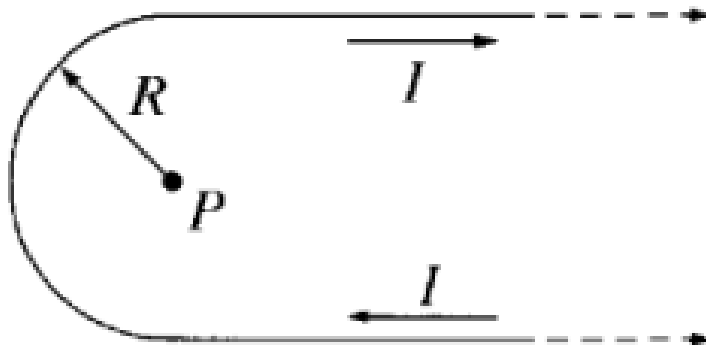
反射和透射强度:

$$R = |r|^2, \quad T = \frac{|t|^2 Z_3}{Z_1}.$$

干涉条件：薄膜厚度 d 引起的相位差 $\Delta\phi = 2k_2d$ ：构成性干涉（增强反射）条件： $\Delta\phi = 2m\pi$, $m \in \mathbb{Z}$ 消失性干涉（增强透射）条件： $\Delta\phi = (2m + 1)\pi$, $m \in \mathbb{Z}$

2024 期末

1. [简单] 直接计算一个矢量场的散度旋度
2. [高斯定理] 球壳已知电荷 $\rho = \rho_0(1 - \frac{r}{R})$ 求电势电场
3. 镜像偶极电荷
4. 计算磁场



5. [高中题] 磁场中旋转方形电流线圈问感应电动势
6. 相对论问 $0.6c$ 到离 12 光年画时空图

附加：旋转偶极的远场推迟势